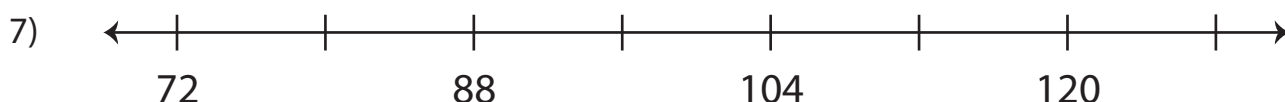
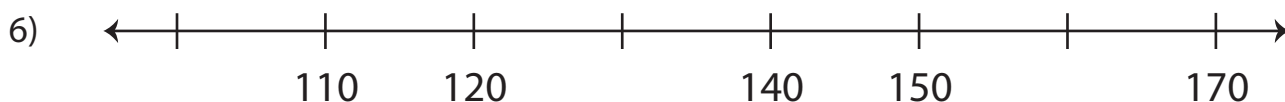
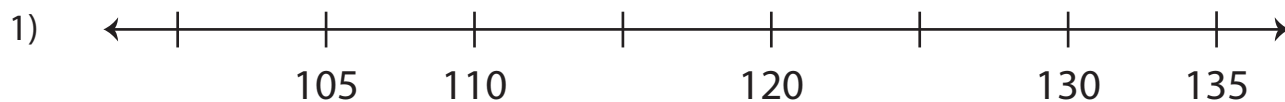


Name : _____

Number Line: Skip Count - 2s to 10s

Sheet 4

Skip count to complete each number line.



PREVIEW

Gain complete access to the largest collection of worksheets in all subjects!

Members, please log in to download this worksheet.

Not a member? Please sign up to gain complete access.

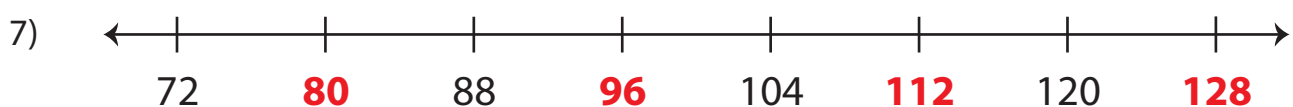
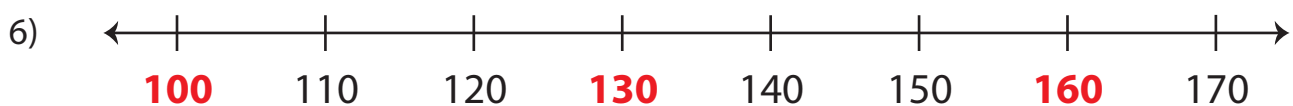
www.mathworksheets4kids.com

Name : _____

Answer Key

Number Line: Skip Count - 2s to 10s

Skip count to complete each number line.



PREVIEW

Gain complete access to the largest collection of worksheets in all subjects!

Members, please log in to download this worksheet.

Not a member? Please sign up to gain complete access.

www.mathworksheets4kids.com