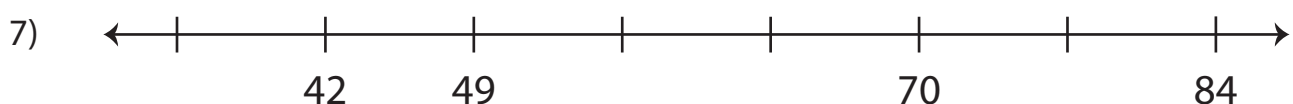
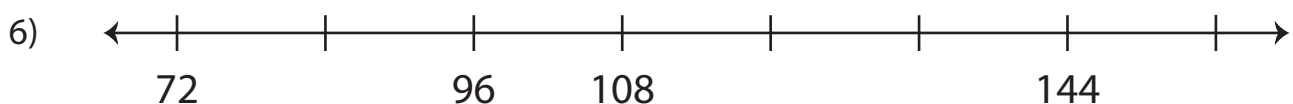
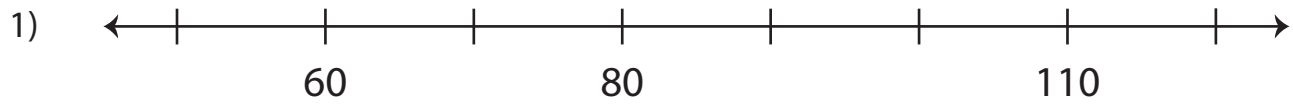


Name : \_\_\_\_\_

## Number Line: Skip Count - 6s to 12s

Sheet 5

Skip count to complete each number line.



# PREVIEW

Gain complete access to the largest collection of worksheets in all subjects!

Members, please log in to download this worksheet.

Not a member? Please sign up to gain complete access.

[www.mathworksheets4kids.com](http://www.mathworksheets4kids.com)

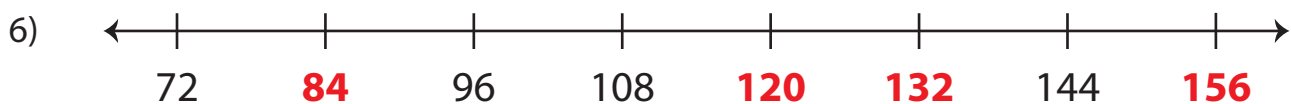
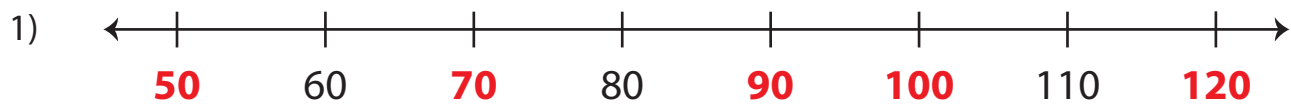
Name : \_\_\_\_\_

## Answer Key

Sheet 5

### Number Line: Skip Count - 6s to 12s

Skip count to complete each number line.



**PREVIEW**

Gain complete access to the largest collection of worksheets in all subjects!

Members, please log in to download this worksheet.

Not a member? Please sign up to gain complete access.

[www.mathworksheets4kids.com](http://www.mathworksheets4kids.com)