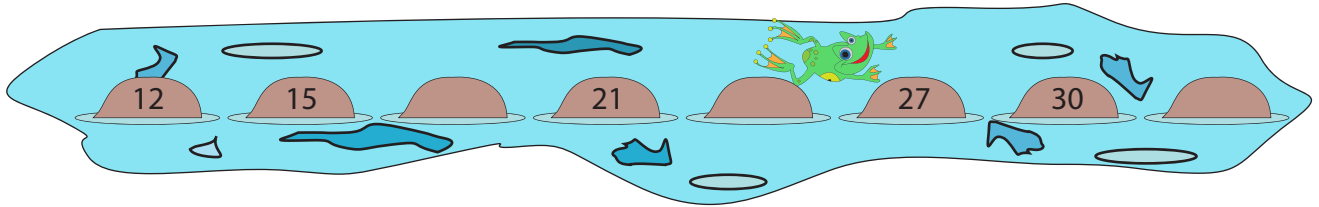


Skip Count - 2s to 5s

- 1) Fred, the frog leaps by 3s. He missed a few rocks. Count by 3s to fill in the missing numbers. Does the number 33 fit in the sequence?



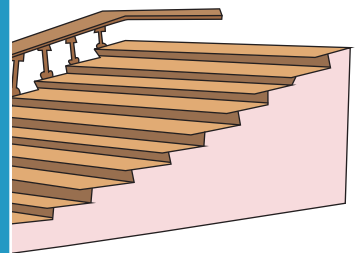
- 2) There are 8 egg crates. Each crate holds 4 eggs. How many eggs are there in all?



- 3) Janice hops 6 times. How many steps did she hop?



Gain complete access to the largest collection of worksheets in all subjects!

- By how many steps



- 4) Help Tina complete her number line. Identify the number that is 10 less than 64. Identify the number that is 10 more than 64.

- ing backwards from



PREVIEW

Members, please log in to download this worksheet.

Not a member? Please sign up to gain complete access.

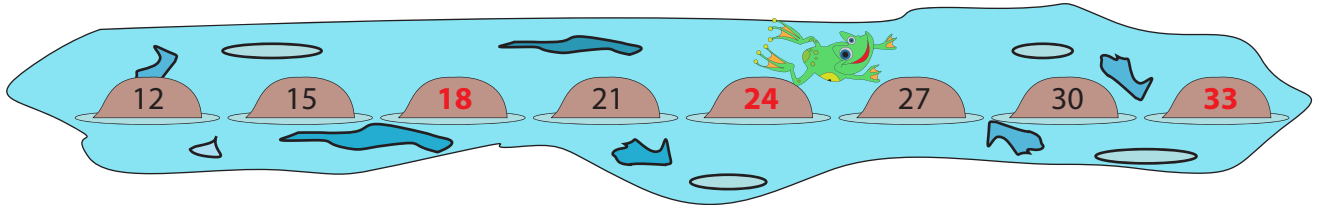
www.mathworksheets4kids.com

- 5) Alex has eight 5 dollar bills in his pocket. How many dollars does he have in total?



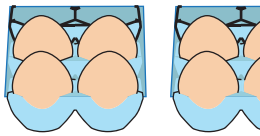
Skip Count - 2s to 5s

- 1) Fred, the frog leaps by 3s. He missed a few rocks. Count by 3s to fill in the missing numbers. Does the number 33 fit in the sequence?

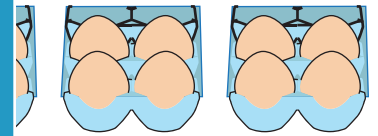


Yes, 33 fits in the sequence.

- 2) There are 8 egg crates. Each crate holds 4 eggs. How many eggs are there in all?



32 eggs



- 3) Janice hops 6 times. How many steps did she hop?

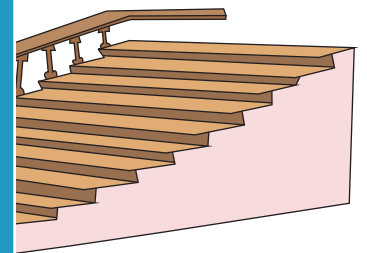
She hopped 6 times.

Gain complete access to the largest collection of worksheets in all subjects!


Members, please log in to download this worksheet.

Not a member? Please sign up to gain complete access.

- 4) How many steps are there going backwards from 64 to 40?



- 4) Help Tina complete the number line. Identify the missing number.



Skip count by 4s

- 4) How many steps are there going backwards from 40 to 36?



- 5) Alex has eight 5 dollar bills in his pocket. How many dollars does he have in total?



\$40