


Name : _____

Skip Count - 2s to 5s

Sheet 3

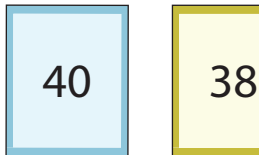
- 1) There are 5 vases on display in a shop. Each vase holds 3 roses. How many roses are there in all? Is your answer 16?




- 2) Nathan went butterfly catching. He placed 4 butterflies in each jar. He has 3 such jars. How many butterflies did he catch in all?



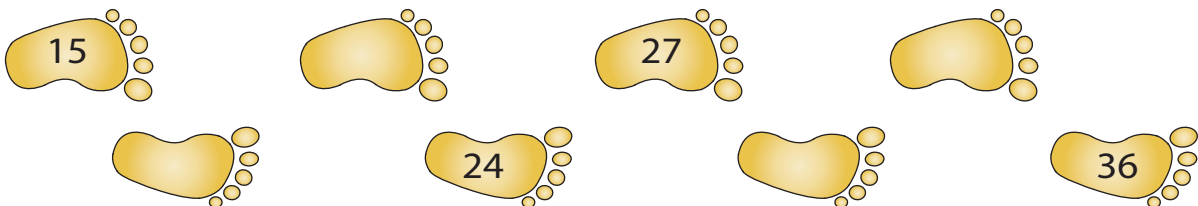
- 3) Help Chris count. Identify the skip



- 4) There are 5 toy cars of all the toy cars



- 5) John walks on a sandy beach. Fill in the missing numbers to retrace his footprints. Identify the skip counting rule.



PREVIEW

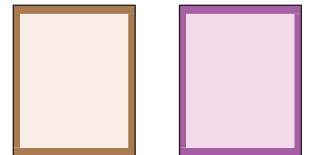
Gain complete access to the largest collection of worksheets in all subjects!

Members, please log in to download this worksheet.

Not a member? Please sign up to gain complete access.

www.mathworksheets4kids.com

the blank flashcards.




What is the total cost



Skip Count - 2s to 5s

- 1) There are 5 vases on display in a shop. Each vase holds 3 roses. How many roses are there in all? Is your answer 16?



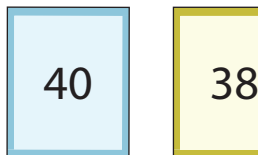
No, there are 15 roses in all.

- 2) Nathan went butterfly catching. He placed 4 butterflies in each jar. He has 3 such jars. How many butterflies did he catch in all?




12 butterflies

- 3) Help Chris count. Identify the skip



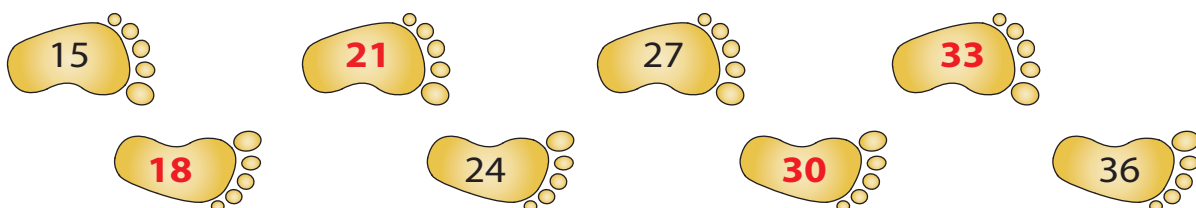
Skip count by

- 4) There are 5 toy cars of all the toy cars



\$20

- 5) John walks on a sandy beach. Fill in the missing numbers to retrace his footprints. Identify the skip counting rule.



Skip count by 3s

PREVIEW

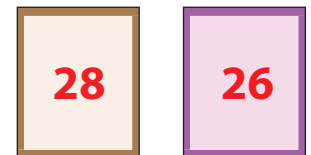
Gain complete access to the largest collection of worksheets in all subjects!

Members, please log in to download this worksheet.

Not a member? Please sign up to gain complete access.

www.mathworksheets4kids.com

the blank flashcards.



What is the total cost