

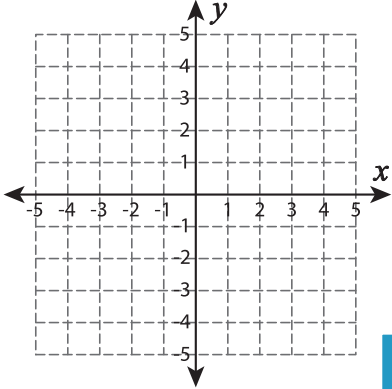
Name : _____

Find the Slope

Sheet 2

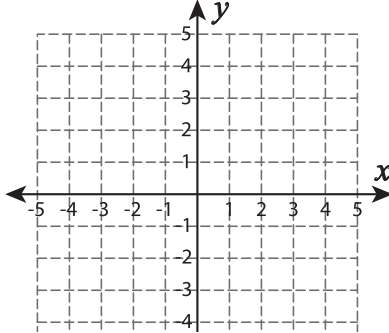
Graph a line through the given pair of points. Find the slope.

1) x-intercept=5, y-intercept=3

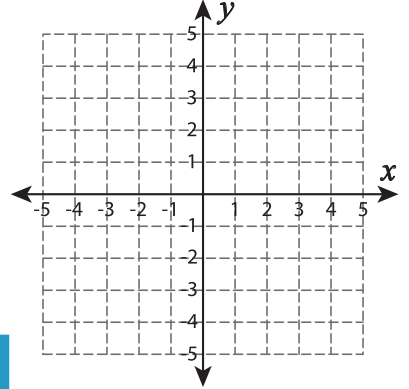


Slope = _____

2) $(-5, -2)$ and $(-2, 2)$

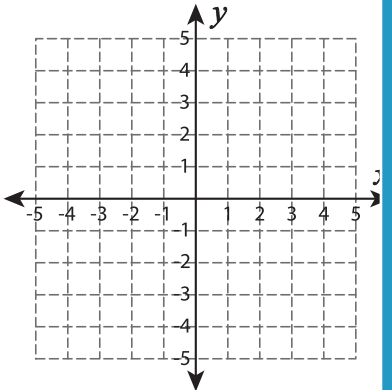


3) $(2, -5)$ and $(0, 0)$



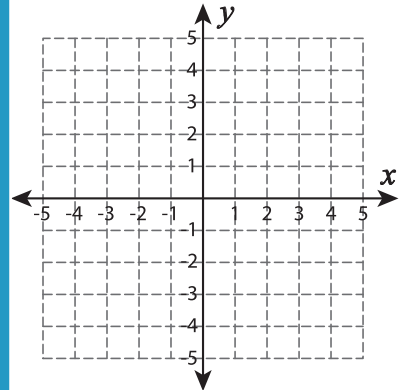
Slope = _____

4) $(3, 5)$ and $(-4, -4)$



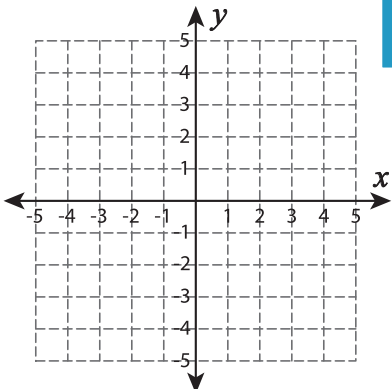
Slope = _____

$(3, 2)$ and $(-1, -2)$

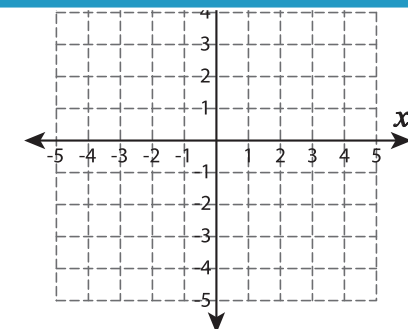


Slope = _____

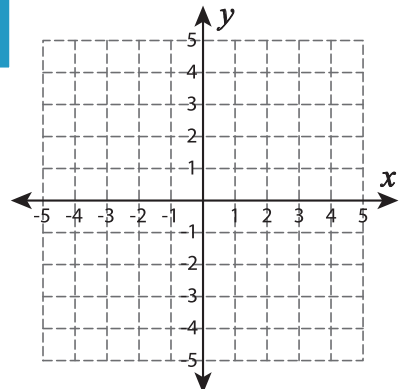
7) $(-2, 4)$ and $(4, -3)$



Slope = _____



Slope = _____



Slope = _____

PREVIEW

Gain complete access to the largest collection of worksheets in all subjects!

Members, please log in to download this worksheet.

Not a member? Please sign up to gain complete access.

www.mathworksheets4kids.com