

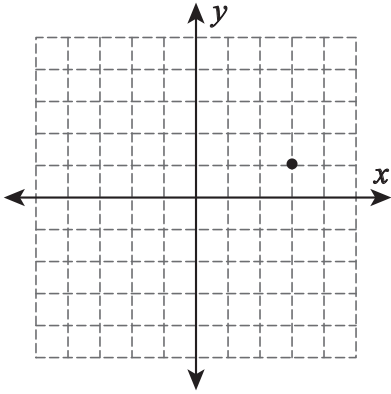
Name : \_\_\_\_\_

# Graphing

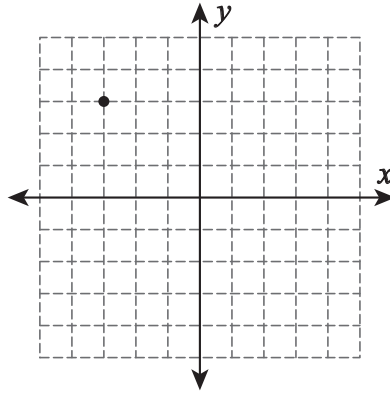
Sheet 1

Draw a line through the point for the given slope.

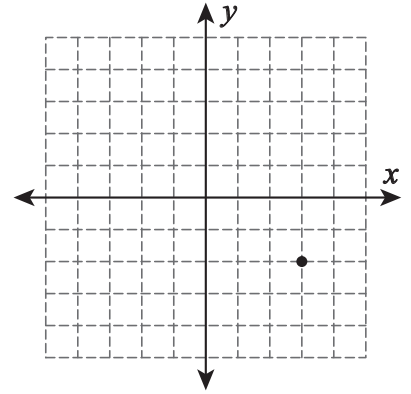
1) Slope =  $\frac{2}{5}$



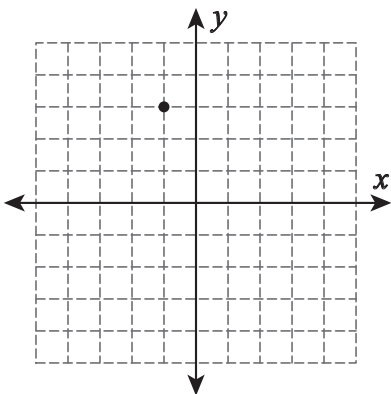
2) Slope =  $-\frac{4}{7}$



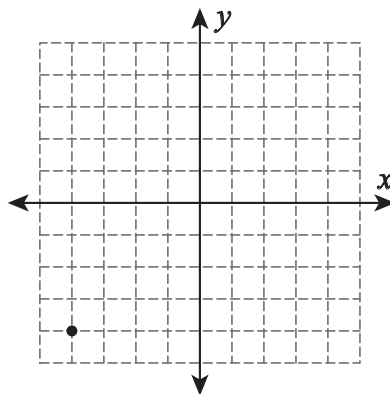
3) Slope =  $\frac{1}{6}$



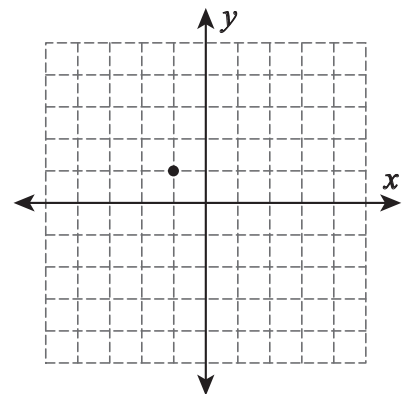
4) Slope =  $-\frac{7}{4}$



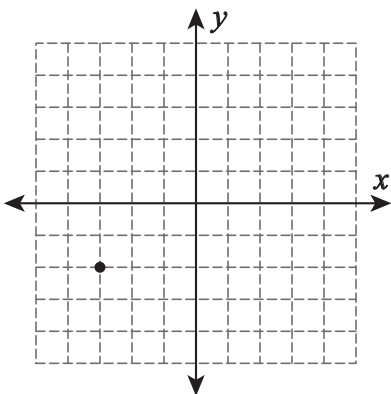
5) Slope =  $\frac{3}{8}$



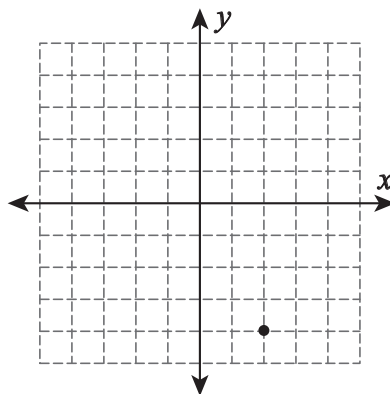
6) Slope =  $-\frac{5}{2}$



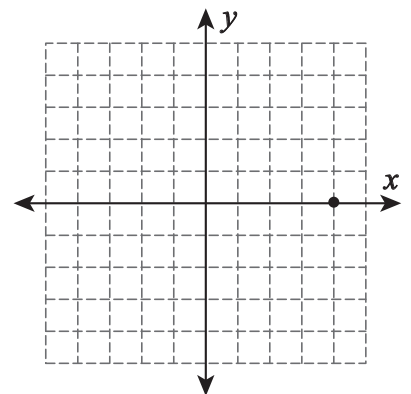
7) Slope =  $\frac{3}{2}$



8) Slope =  $-\frac{8}{5}$



9) Slope =  $\frac{1}{3}$



Name : \_\_\_\_\_

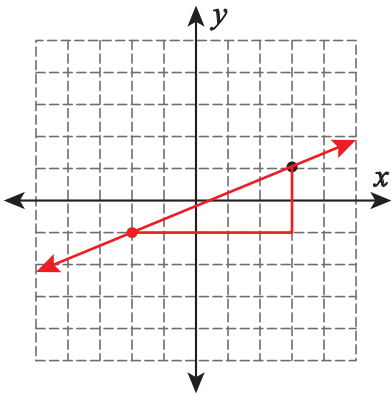
**Answer key**

**Graphing**

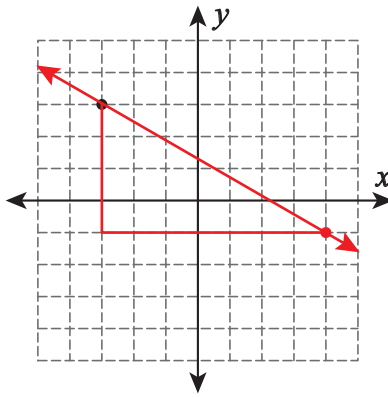
Sheet 1

Draw a line through the point for the given slope.

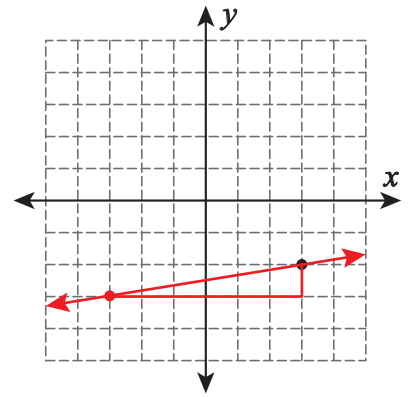
1) Slope =  $\frac{2}{5}$



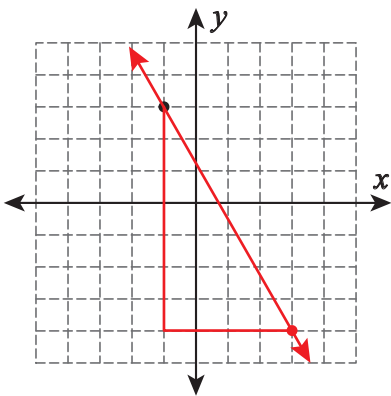
2) Slope =  $-\frac{4}{7}$



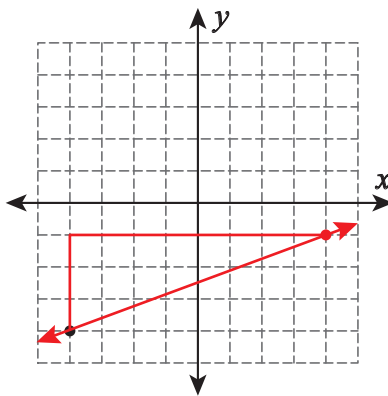
3) Slope =  $\frac{1}{6}$



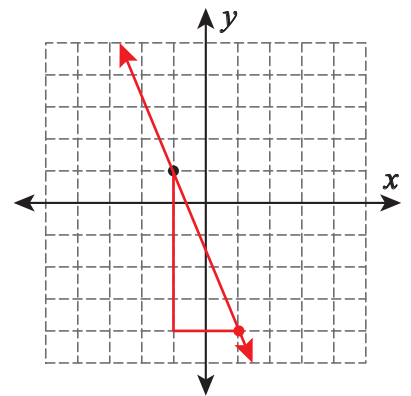
4) Slope =  $-\frac{7}{4}$



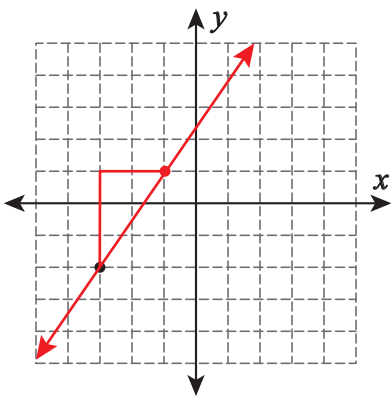
5) Slope =  $\frac{3}{8}$



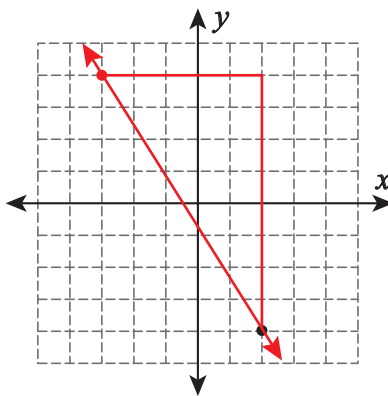
6) Slope =  $-\frac{5}{2}$



7) Slope =  $\frac{3}{2}$



8) Slope =  $-\frac{8}{5}$



9) Slope =  $\frac{1}{3}$

