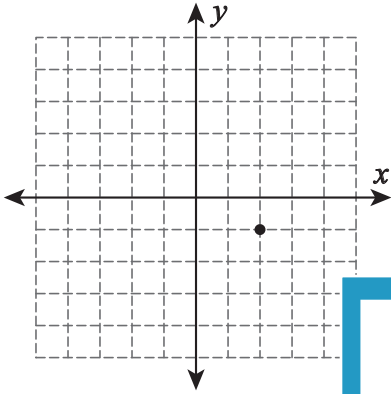
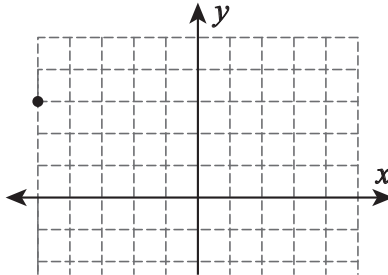


Draw a line through the point for the given slope.

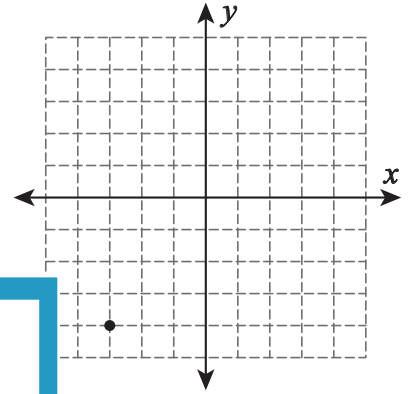
1) Slope =  $-\frac{5}{3}$



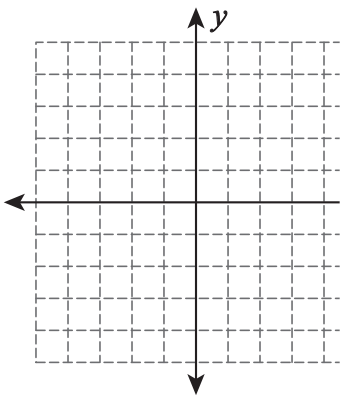
2) Slope =  $\frac{1}{8}$



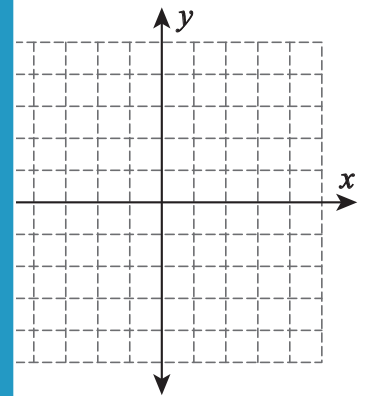
3) Slope =  $\frac{9}{5}$



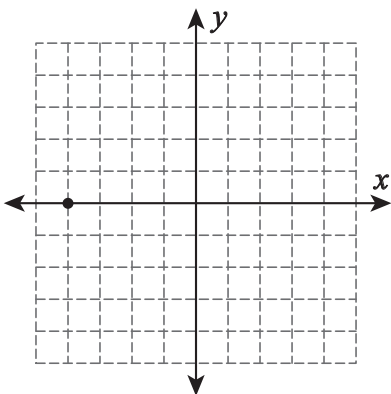
4) Slope =  $\frac{1}{9}$



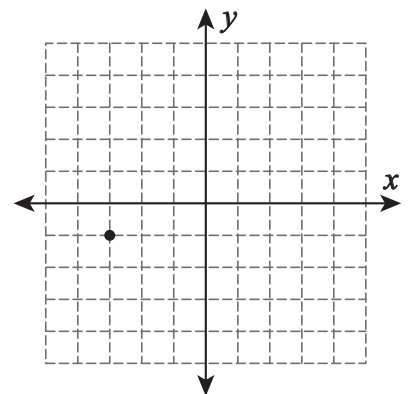
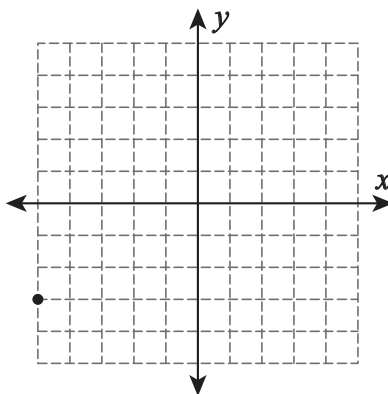
Slope =  $-\frac{6}{7}$



7) Slope =  $-\frac{5}{9}$



Slope =  $\frac{5}{6}$



# PREVIEW

Gain complete access to the largest  
collection of worksheets in all subjects!

Members, please  
log in to  
download this  
worksheet.

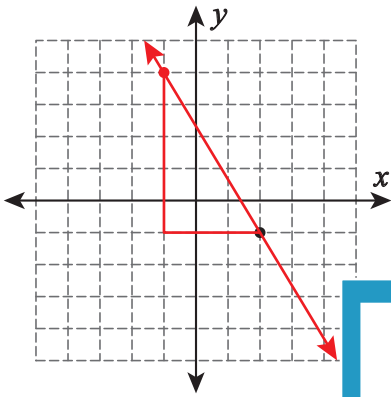
Not a member?  
Please sign up to  
gain complete  
access.

[www.mathworksheets4kids.com](http://www.mathworksheets4kids.com)

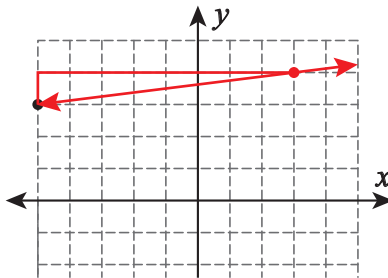
**Graphing**

Draw a line through the point for the given slope.

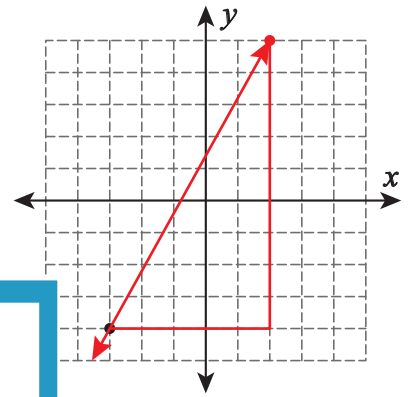
1) Slope =  $-\frac{5}{3}$



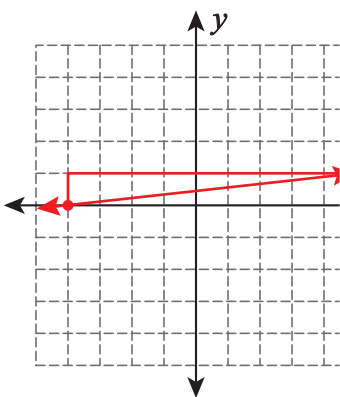
2) Slope =  $\frac{1}{8}$



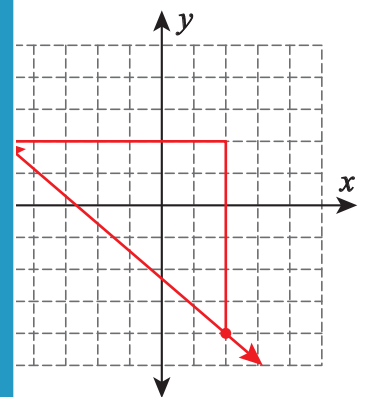
3) Slope =  $\frac{9}{5}$



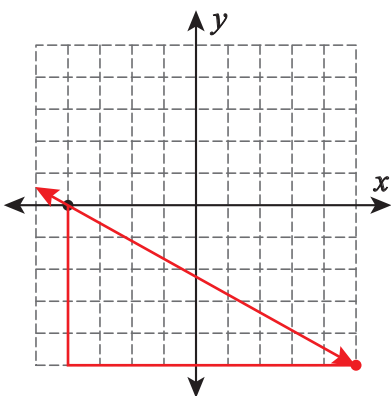
4) Slope =  $\frac{1}{9}$



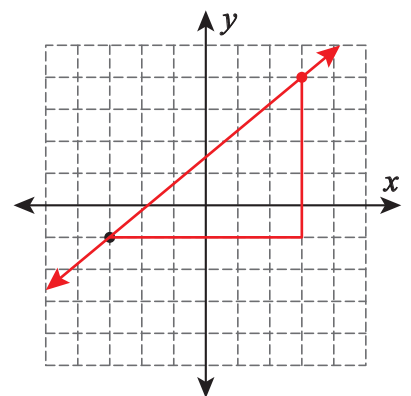
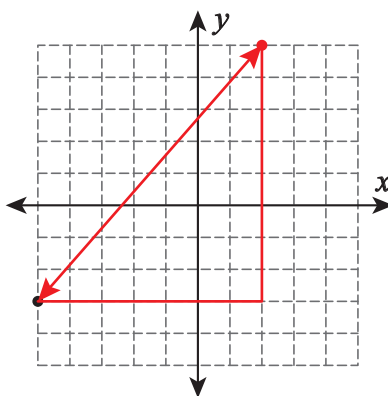
Slope =  $-\frac{6}{7}$



7) Slope =  $-\frac{5}{9}$



Slope =  $\frac{5}{6}$



**PREVIEW**

Gain complete access to the largest collection of worksheets in all subjects!

Members, please log in to download this worksheet.

Not a member? Please sign up to gain complete access.

[www.mathworksheets4kids.com](http://www.mathworksheets4kids.com)