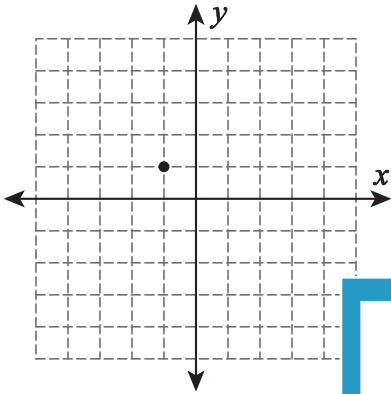
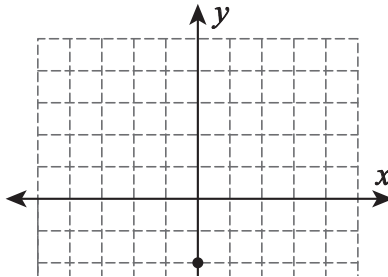


Draw a line through the point for the given slope.

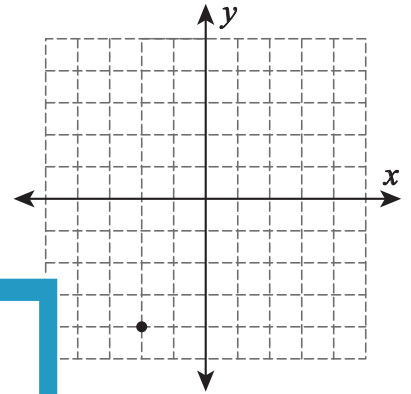
1) Slope = $\frac{1}{4}$



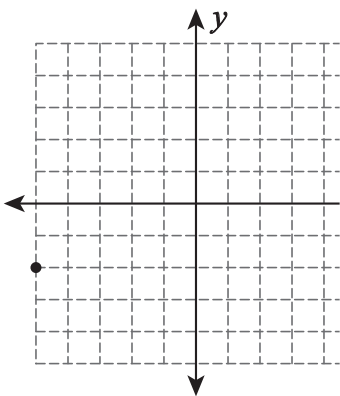
2) Slope = $-\frac{2}{3}$



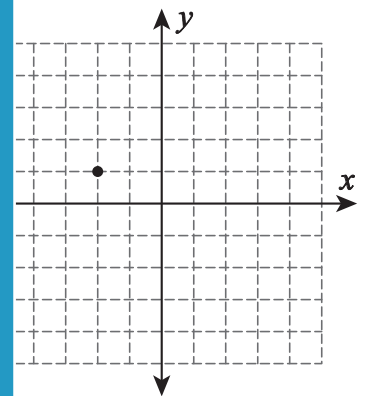
3) Slope = $\frac{9}{2}$



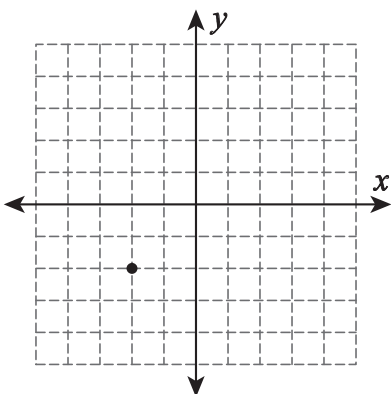
4) Slope = $\frac{3}{8}$



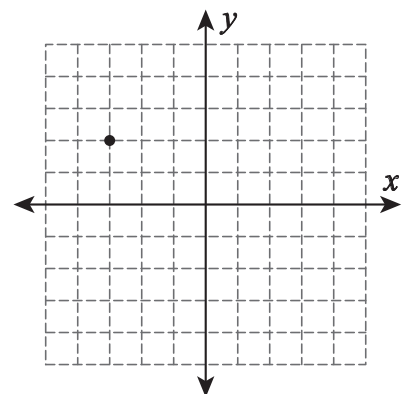
Slope = $-\frac{5}{4}$



7) Slope = $-\frac{1}{2}$



Slope = $-\frac{3}{5}$



PREVIEW

Gain complete access to the largest
collection of worksheets in all subjects!

Members, please
log in to
download this
worksheet.

Not a member?
Please sign up to
gain complete
access.

www.mathworksheets4kids.com