

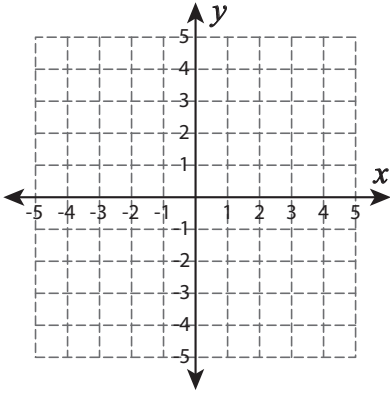
Name : _____

Types of Slopes

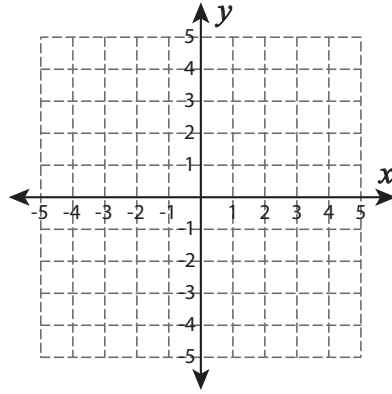
Sheet 1

A) Draw a line through the given coordinates and identify the types of slopes.

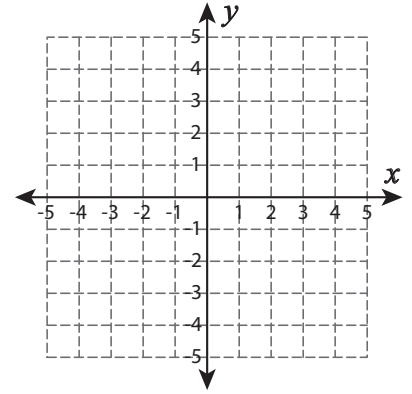
1) $(5, 1)$ and $(2, 4)$



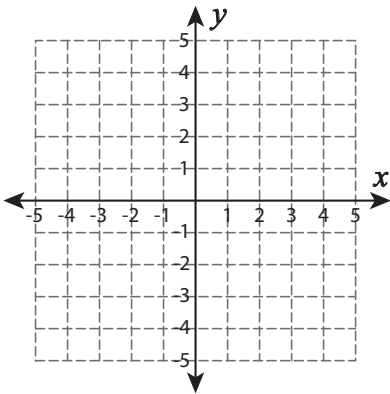
2) $(-2, 3)$ and $(-2, -5)$



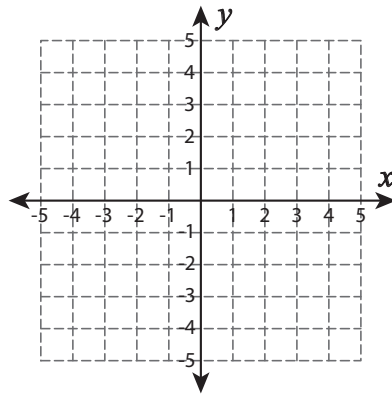
3) $(-1, 2)$ and $(-4, 0)$



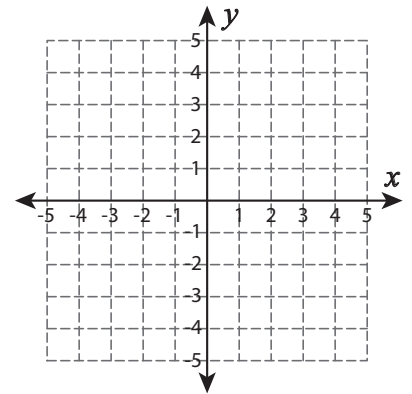
4) $(-4, -2)$ and $(1, 2)$



5) $(0, 5)$ and $(4, 1)$

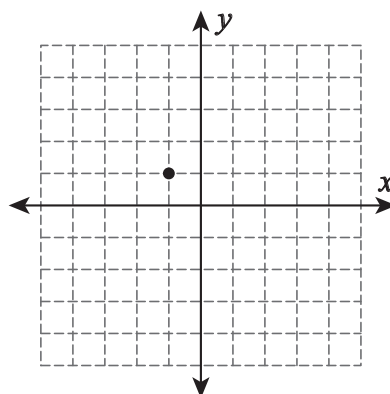


6) $(-3, -4)$ and $(5, -4)$

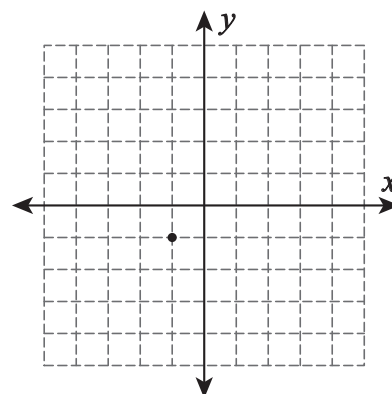


B) Draw a line through the point for the given type of slope.

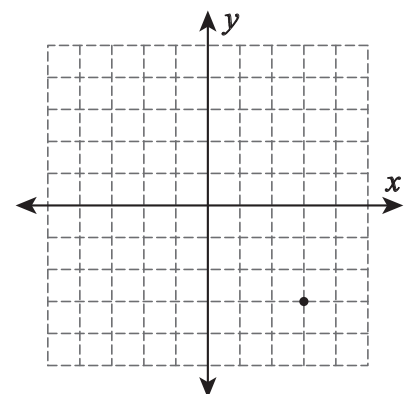
1) Positive slope



2) Zero slope



3) Negative slope



Name : _____

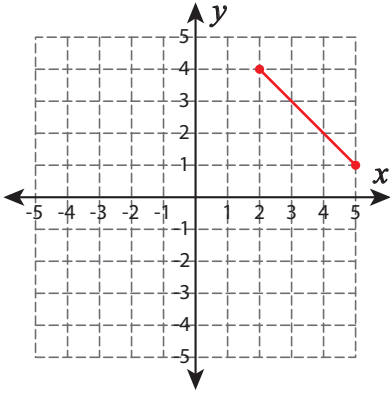
Answer key

Types of Slopes

Sheet 1

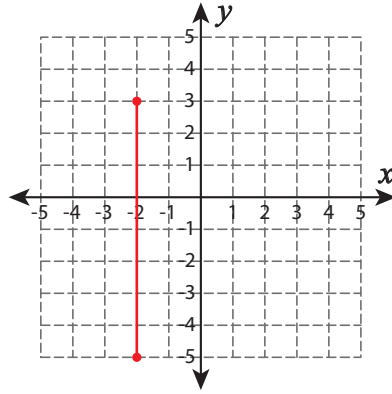
A) Draw a line through the given coordinates and identify the types of slopes.

1) $(5, 1)$ and $(2, 4)$



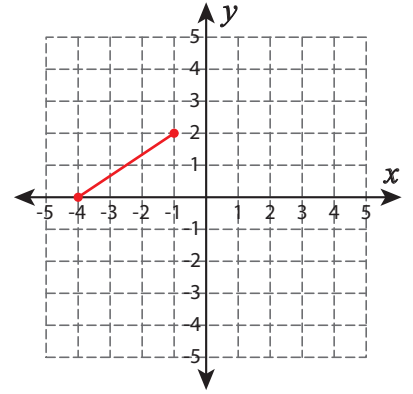
Negative slope

2) $(-2, 3)$ and $(-2, -5)$



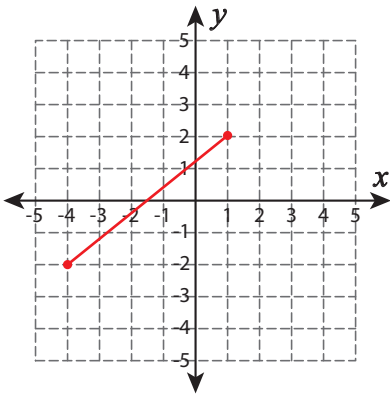
Undefined slope

3) $(-1, 2)$ and $(-4, 0)$



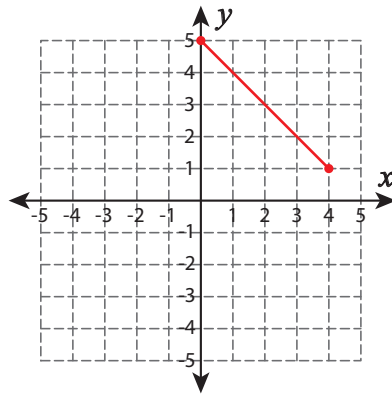
Positive slope

4) $(-4, -2)$ and $(1, 2)$



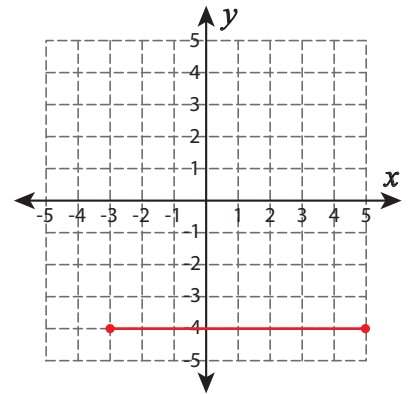
Positive slope

5) $(0, 5)$ and $(4, 1)$



Negative slope

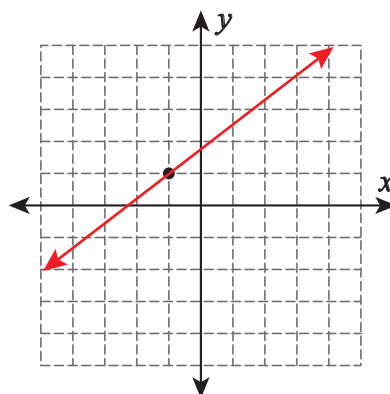
6) $(-3, -4)$ and $(5, -4)$



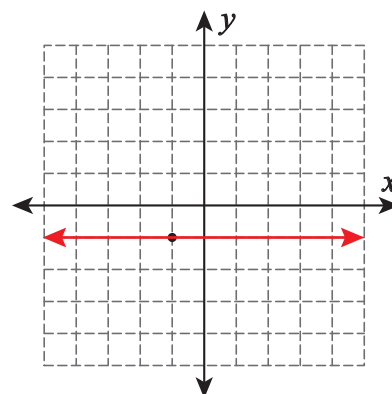
Zero slope

B) Draw a line through the point for the given type of slope.

1) Positive slope



2) Zero slope



3) Negative slope

