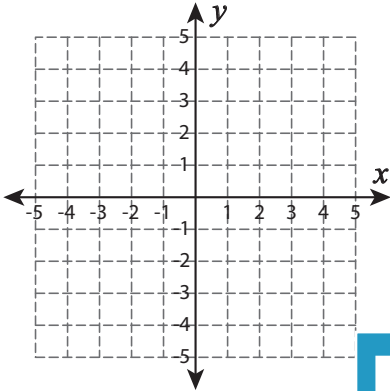


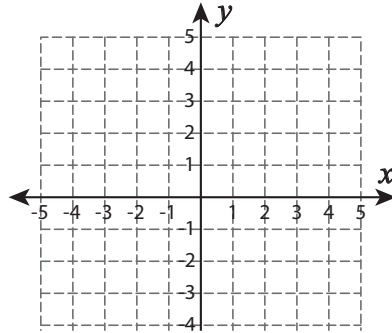
Types of Slopes

A) Draw a line through the given coordinates and identify the types of slopes.

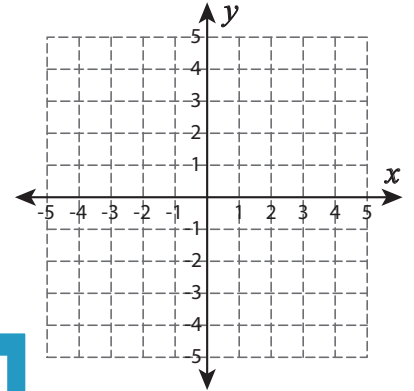
1) $(-2, -3)$ and $(4, 0)$



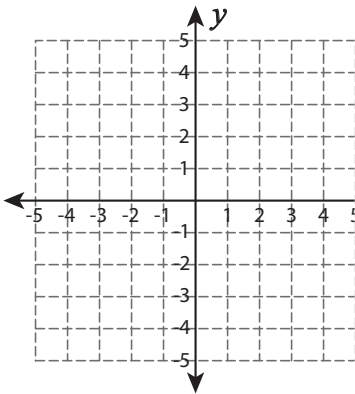
2) $(-5, 4)$ and $(3, 4)$



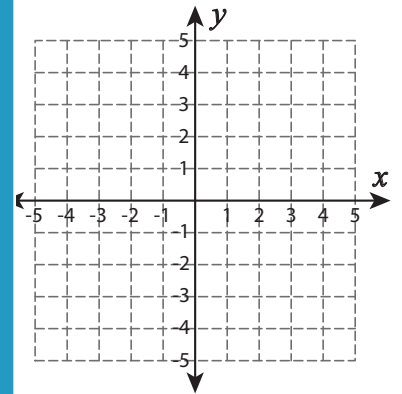
3) $(-3, 5)$ and $(1, -2)$



4) $(3, 1)$ and $(3, -5)$



5) $(2, 3)$ and $(-1, -4)$



PREVIEW

Gain complete access to the largest collection of worksheets in all subjects!

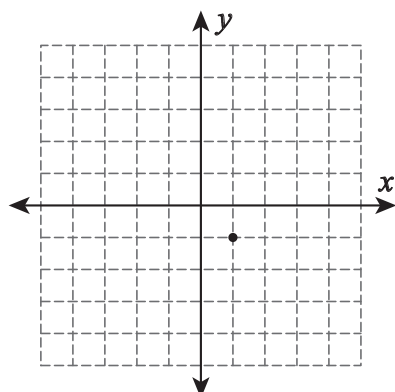
Members, please log in to download this worksheet.

Not a member? Please sign up to gain complete access.

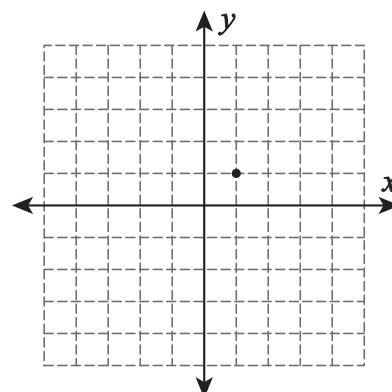
www.mathworksheets4kids.com

B) Draw a line through

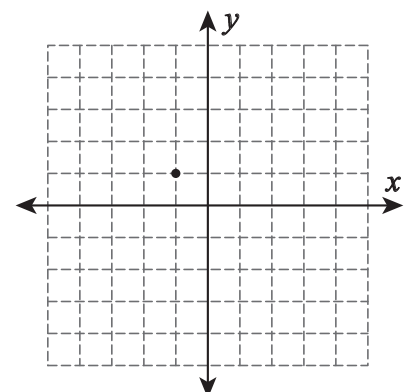
1) Negative slope



2) Undefined slope



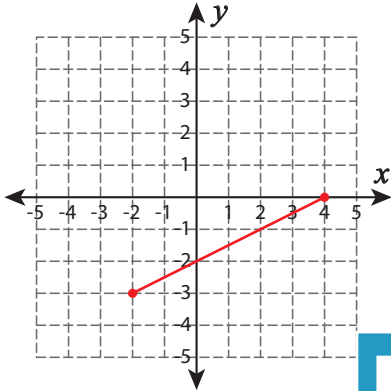
3) Positive slope



Types of Slopes

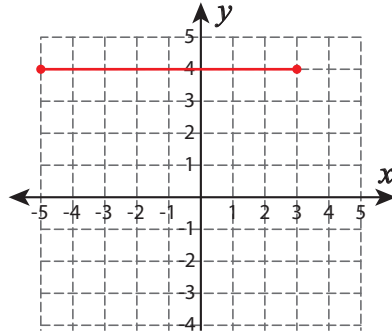
A) Draw a line through the given coordinates and identify the types of slopes.

1) $(-2, -3)$ and $(4, 0)$

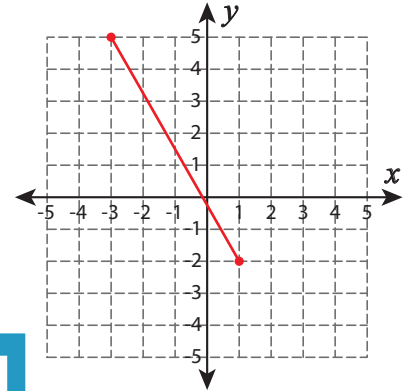


Positive slope

2) $(-5, 4)$ and $(3, 4)$

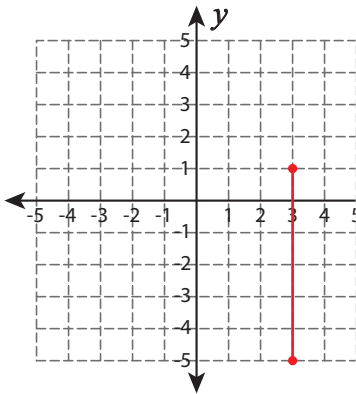


3) $(-3, 5)$ and $(1, -2)$



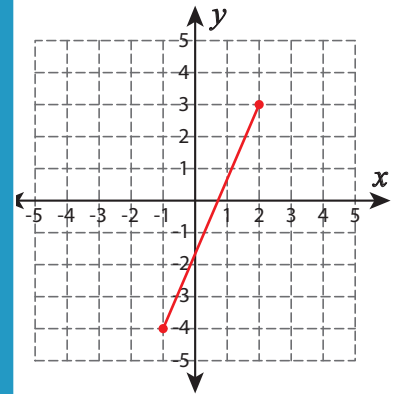
Negative slope

4) $(3, 1)$ and $(3, -5)$



Undefined slope

5) $(2, 3)$ and $(-1, -4)$



Positive slope

PREVIEW

Gain complete access to the largest collection of worksheets in all subjects!

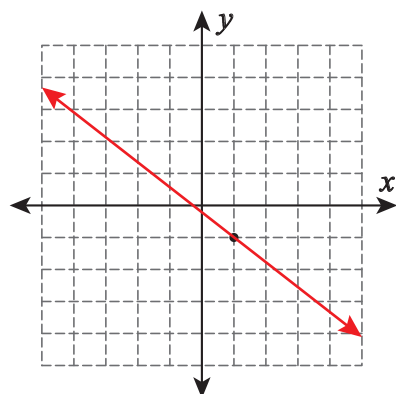
Members, please log in to download this worksheet.

Not a member? Please sign up to gain complete access.

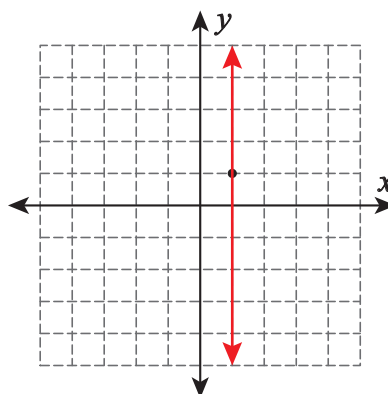
www.mathworksheets4kids.com

B) Draw a line through

1) Negative slope



2) Undefined slope



3) Positive slope

