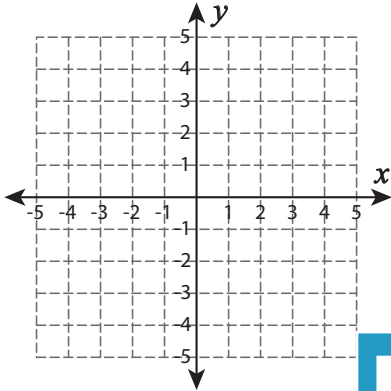


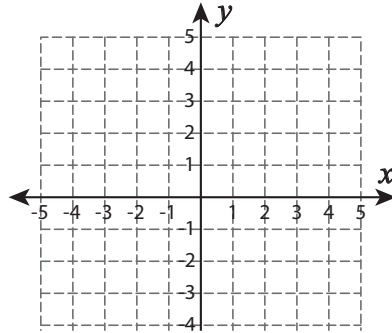
Types of Slopes

A) Draw a line through the given coordinates and identify the types of slopes.

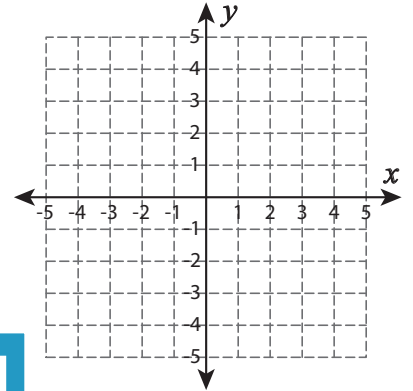
1) $(-1, 0)$ and $(5, 0)$



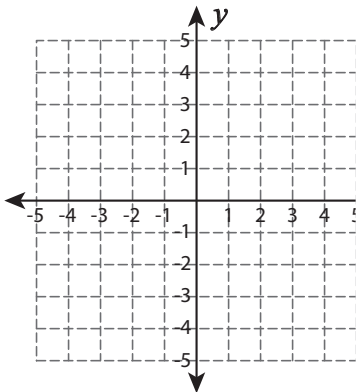
2) $(-4, -3)$ and $(2, 4)$



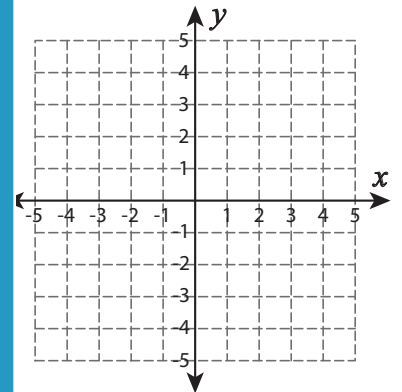
3) $(2, -1)$ and $(-3, 3)$



4) $(-2, -3)$ and $(0, 1)$



5) $(1, 3)$ and $(1, -4)$



PREVIEW

Gain complete access to the largest collection of worksheets in all subjects!

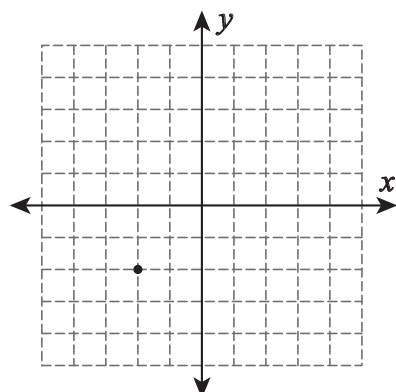
Members, please log in to download this worksheet.

Not a member? Please sign up to gain complete access.

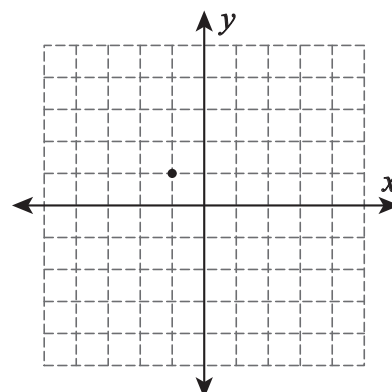
www.mathworksheets4kids.com

B) Draw a line through

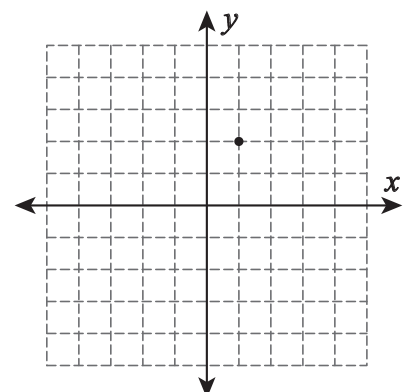
1) Undefined slope



2) Positive slope



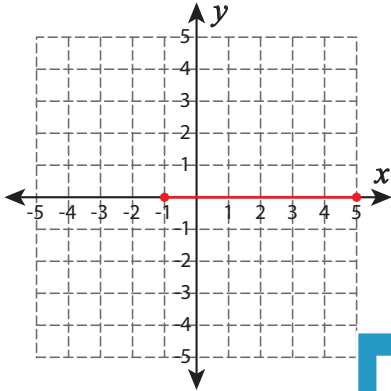
3) Negative slope



Types of Slopes

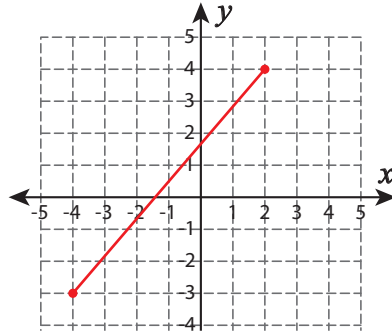
A) Draw a line through the given coordinates and identify the types of slopes.

1) $(-1, 0)$ and $(5, 0)$

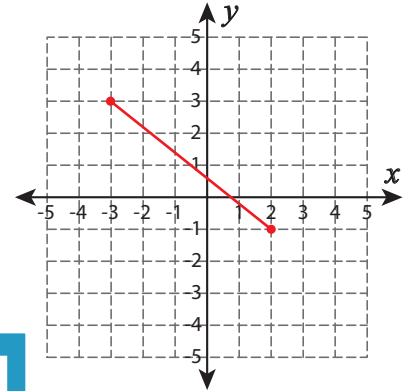


Zero slope

2) $(-4, -3)$ and $(2, 4)$

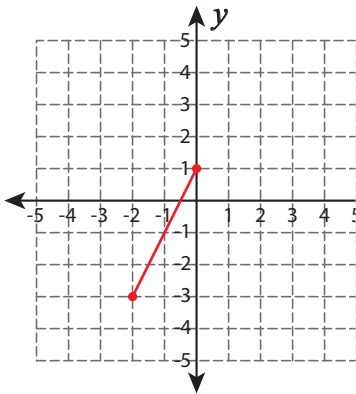


3) $(2, -1)$ and $(-3, 3)$



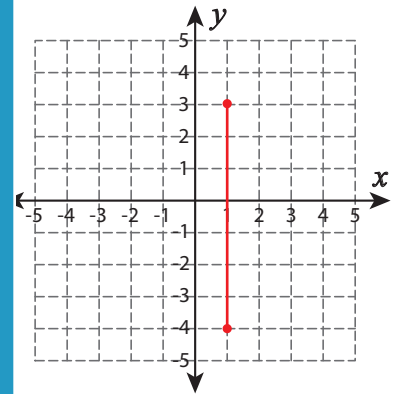
Negative slope

4) $(-2, -3)$ and $(0, 1)$



Positive slope

5) $(1, 3)$ and $(1, -4)$



Undefined slope

PREVIEW

Gain complete access to the largest collection of worksheets in all subjects!

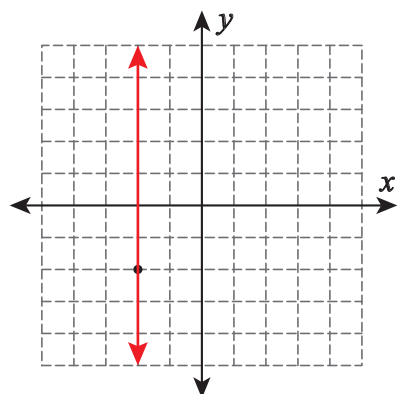
Members, please log in to download this worksheet.

Not a member? Please sign up to gain complete access.

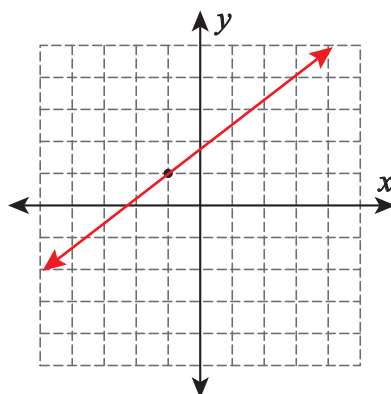
www.mathworksheets4kids.com

B) Draw a line through

1) Undefined slope



2) Positive slope



3) Negative slope

