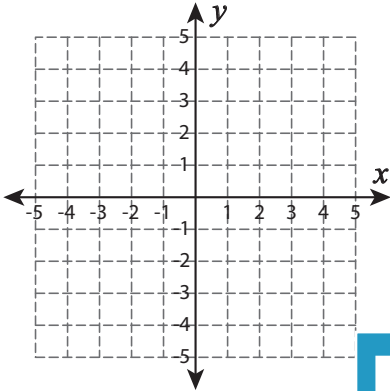


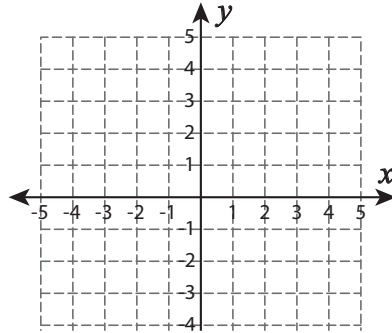
Types of Slopes

A) Draw a line through the given coordinates and identify the types of slopes.

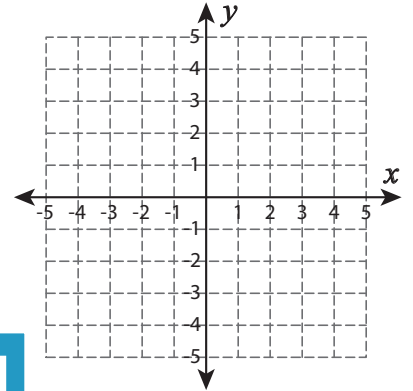
1) $(-1, -2)$ and $(1, 2)$



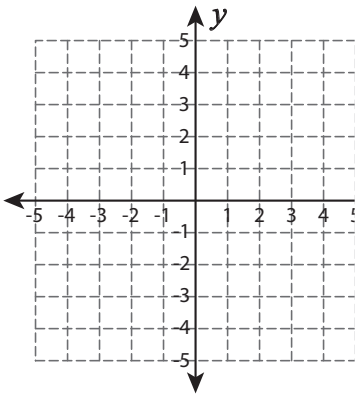
2) $(-1, 3)$ and $(-1, -1)$



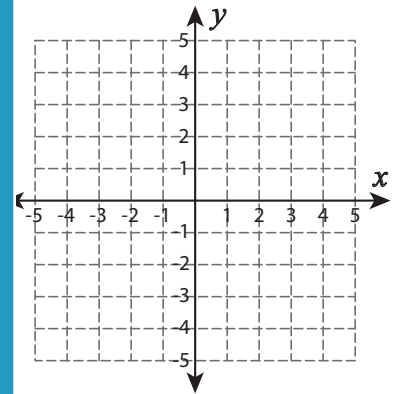
3) $(-3, 4)$ and $(0, -3)$



4) $(0, -4)$ and $(-5, -1)$



5) $(-4, -3)$ and $(1, 5)$



PREVIEW

Gain complete access to the largest
collection of worksheets in all subjects!

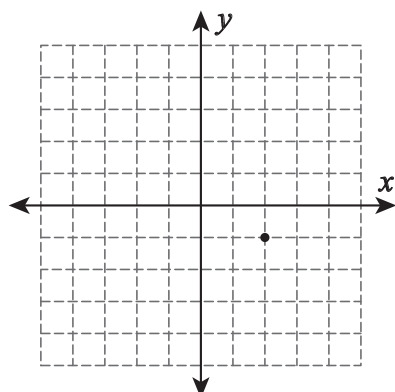
Members, please
log in to
download this
worksheet.

Not a member?
Please sign up to
gain complete
access.

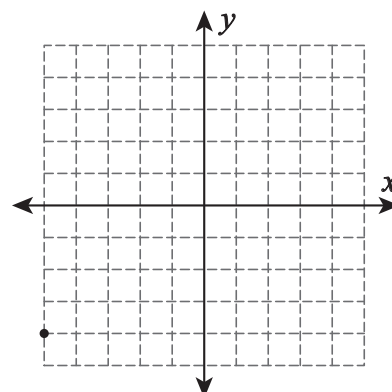
www.mathworksheets4kids.com

B) Draw a line through

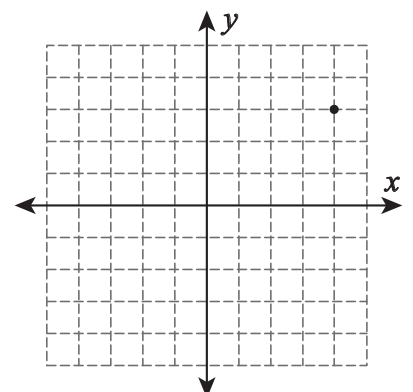
1) Positive slope



2) Undefined slope



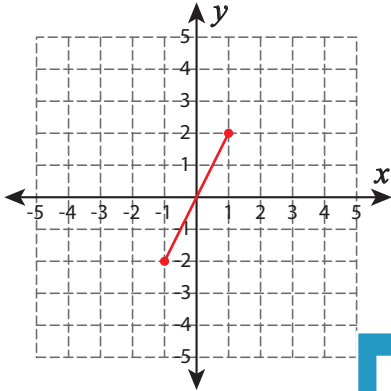
3) Zero slope



Types of Slopes

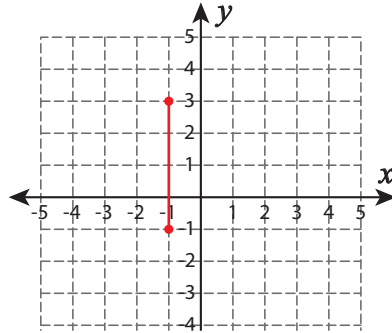
A) Draw a line through the given coordinates and identify the types of slopes.

1) $(-1, -2)$ and $(1, 2)$



Positive slope

2) $(-1, 3)$ and $(-1, -1)$



PREVIEW

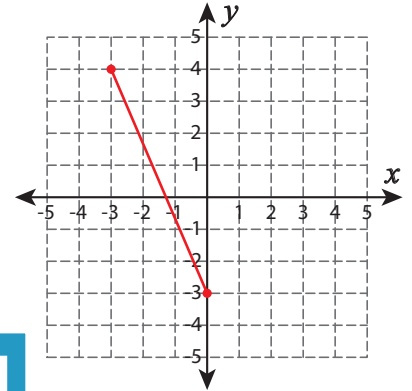
Gain complete access to the largest collection of worksheets in all subjects!

Members, please log in to download this worksheet.

Not a member? Please sign up to gain complete access.

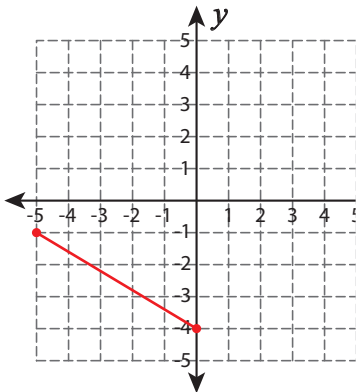
www.mathworksheets4kids.com

3) $(-3, 4)$ and $(0, -3)$



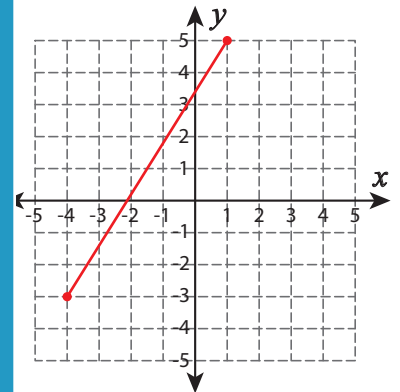
Negative slope

4) $(0, -4)$ and $(-5, -1)$



Negative slope

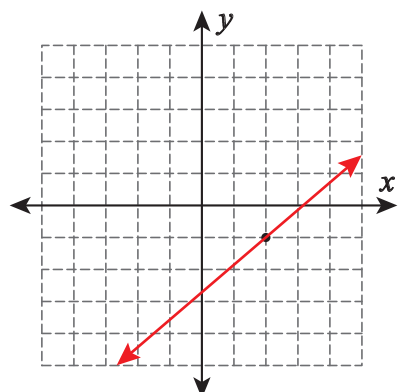
5) $(-4, -3)$ and $(1, 5)$



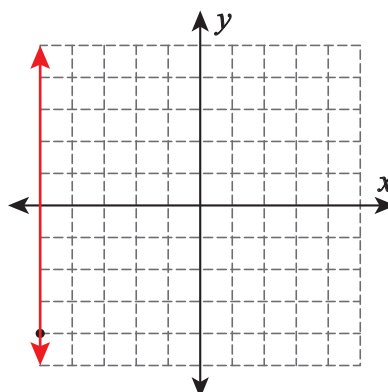
Positive slope

B) Draw a line through

1) Positive slope



2) Undefined slope



3) Zero slope

