


Name : \_\_\_\_\_

## Slope of the Roof

Sheet 2


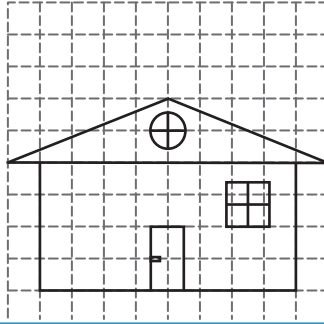
Find the slope of each roof. (The slope should be positive)

1)



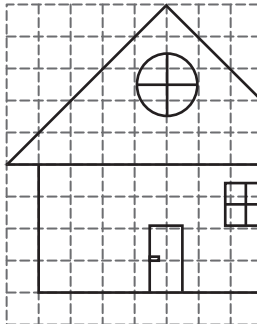
Slope = \_\_\_\_\_

2)



Slope = \_\_\_\_\_

4)



Slope = \_\_\_\_\_

Access the largest collection of worksheets for just **\$19.95** per year!


Members, please log in to download this worksheet.

**Log in**

Not a member? Please sign up to gain complete access.


**Sign up**

[www.mathworksheets4kids.com](http://www.mathworksheets4kids.com)

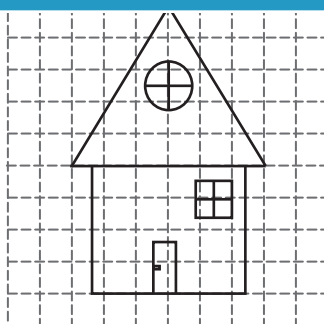


Slope = \_\_\_\_\_

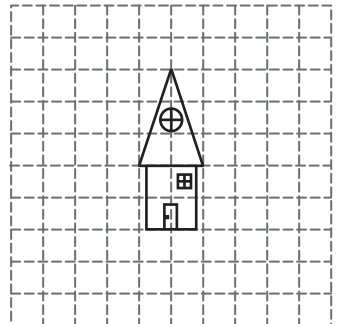
7)



Slope = \_\_\_\_\_



Slope = \_\_\_\_\_



Slope = \_\_\_\_\_


Name : \_\_\_\_\_

**Answer key**

**Slope of the Roof**

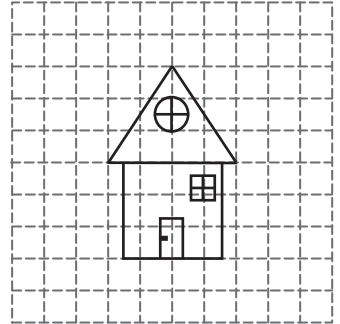
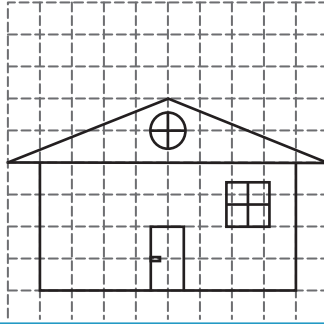
Find the slope of each roof. (The slope should be positive)

1)




Slope =  $\frac{4}{3}$

2)



Slope =  $\frac{3}{2}$

4)



Slope =  $1$

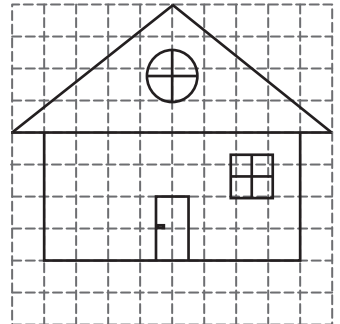
**PREVIEW**

Access the largest collection of worksheets for just **\$19.95** per year!

Members, please log in to download this worksheet. **Log in**


Not a member? Please sign up to gain complete access. **Sign up**

[www.mathworksheets4kids.com](http://www.mathworksheets4kids.com)

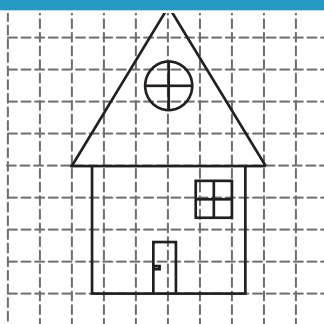


Slope =  $\frac{4}{5}$

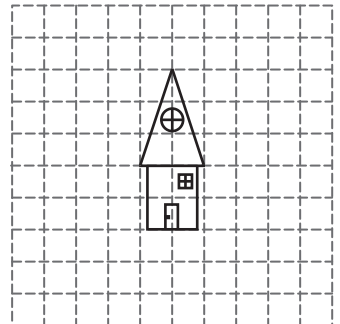
7)



Slope =  $\frac{3}{4}$



Slope =  $\frac{5}{3}$



Slope =  $3$