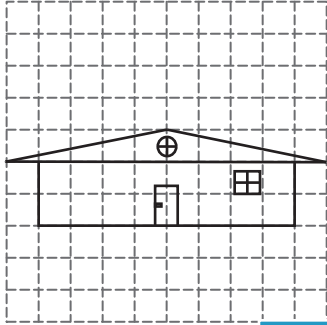


Slope of the Roof


Find the slope of each roof. (The slope should be positive)

1)




Slope = _____

2)

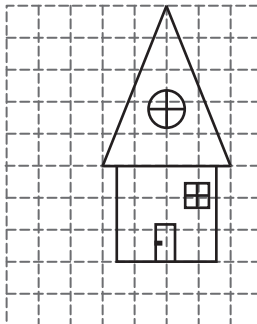


3)




Slope = _____

4)




Slope = _____

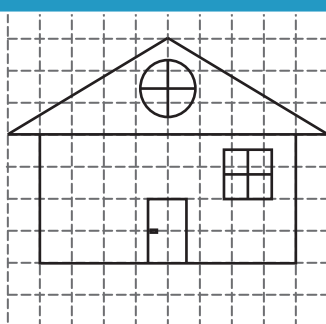


Slope = _____


7)



Slope = _____



Slope = _____



Slope = _____

PREVIEW

Gain complete access to the largest collection of worksheets in all subjects!

Members, please log in to download this worksheet.

Not a member? Please sign up to gain complete access.

www.mathworksheets4kids.com