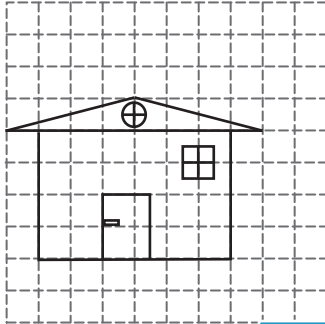


Slope of the Roof


Find the slope of each roof. (The slope should be positive)

1)




Slope = _____

2)

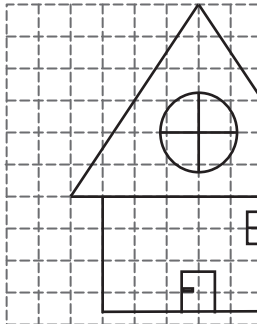


3)

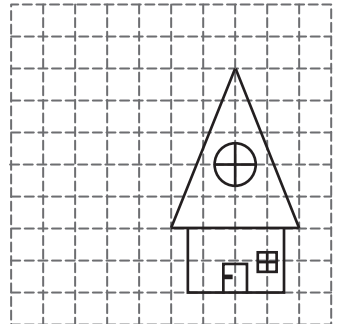


Slope = _____

4)




Slope = _____

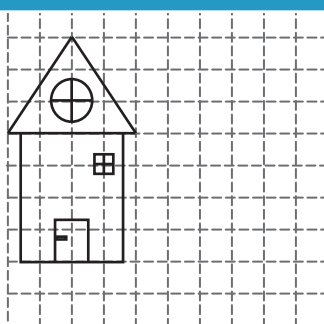


Slope = _____

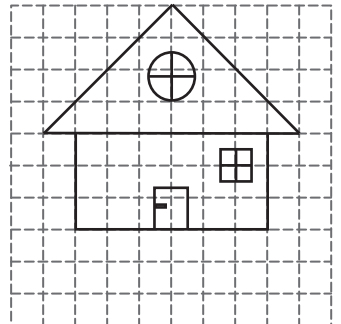
7)



Slope = _____



Slope = _____



Slope = _____

PREVIEW

Gain complete access to the largest collection of worksheets in all subjects!

Members, please log in to download this worksheet.

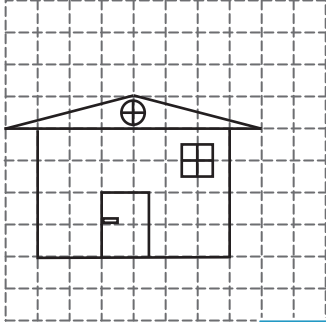
Not a member? Please sign up to gain complete access.

www.mathworksheets4kids.com

Slope of the Roof



Find the slope of each roof. (The slope should be positive)

1)



Slope = $\frac{1}{4}$

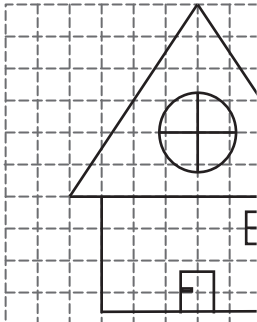
2)



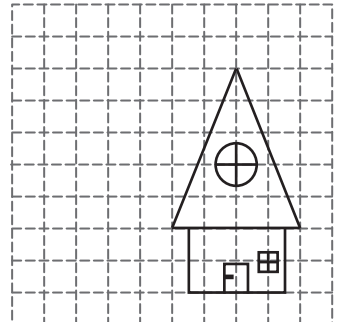
Slope = $\frac{4}{3}$

3)

4)




Slope = $\frac{3}{2}$

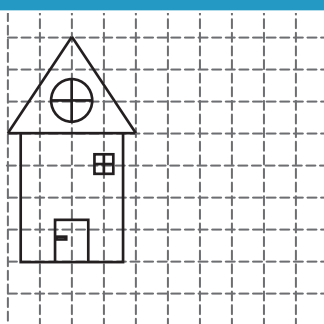


Slope = $\frac{5}{2}$


7)



Slope = 2



Slope = $\frac{3}{2}$



Slope = 1

PREVIEW

Gain complete access to the largest
collection of worksheets in all subjects!

Members, please
log in to
download this
worksheet.

Not a member?
Please sign up to
gain complete
access.

www.mathworksheets4kids.com