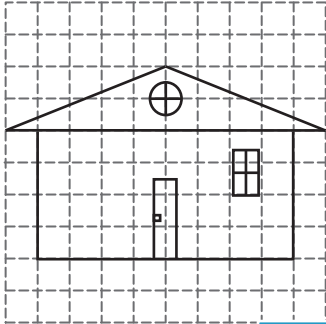


Name : \_\_\_\_\_

# Slope of the Roof


Find the slope of each roof. (The slope should be positive)

1)



Slope = \_\_\_\_\_

2)

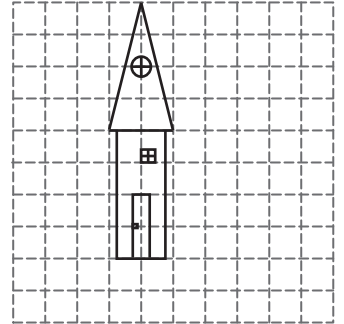


4)



Slope = \_\_\_\_\_

3)



Slope = \_\_\_\_\_

**PREVIEW**


Gain complete access to the largest collection of worksheets in all subjects!

Members, please log in to download this worksheet.

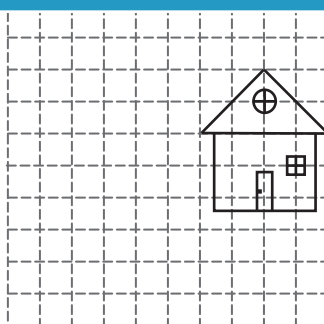
Not a member? Please sign up to gain complete access.

[www.mathworksheets4kids.com](http://www.mathworksheets4kids.com)


7)



Slope = \_\_\_\_\_



Slope = \_\_\_\_\_



Slope = \_\_\_\_\_

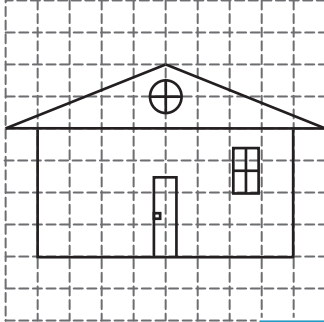
Name : \_\_\_\_\_

**Answer key**

**Slope of the Roof**

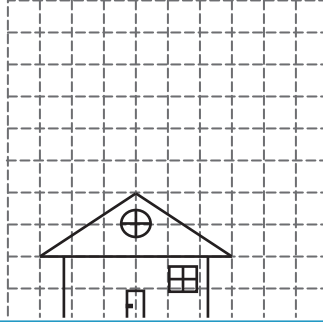
Find the slope of each roof. (The slope should be positive)

1)

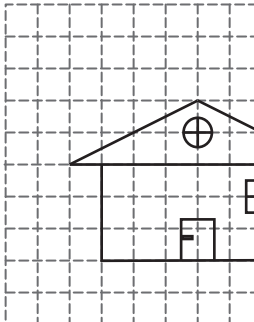


Slope =  $\frac{2}{5}$

2)

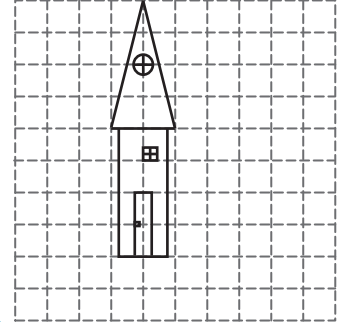


4)



Slope =  $\frac{1}{2}$

3)



Slope =  $4$


**PREVIEW**

Gain complete access to the largest collection of worksheets in all subjects!

Members, please log in to download this worksheet.


Not a member? Please sign up to gain complete access.

[www.mathworksheets4kids.com](http://www.mathworksheets4kids.com)

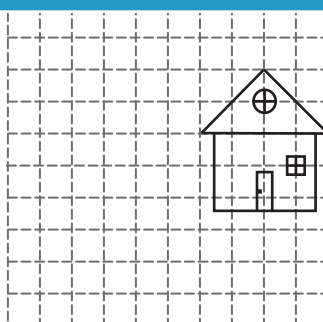


Slope =  $1$

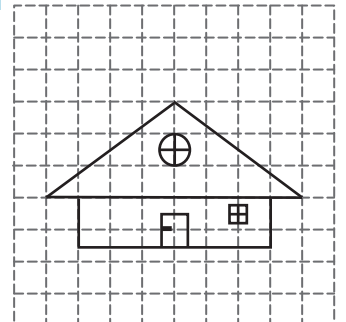
7)



Slope =  $2$



Slope =  $1$



Slope =  $\frac{3}{4}$