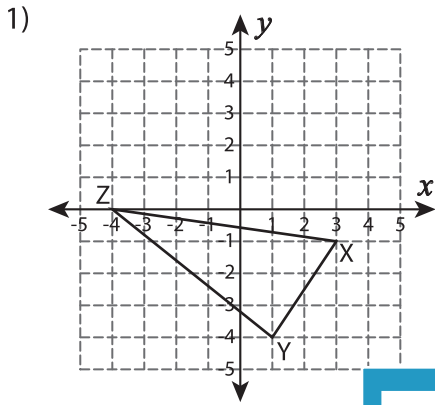


Finding Slopes: Shapes

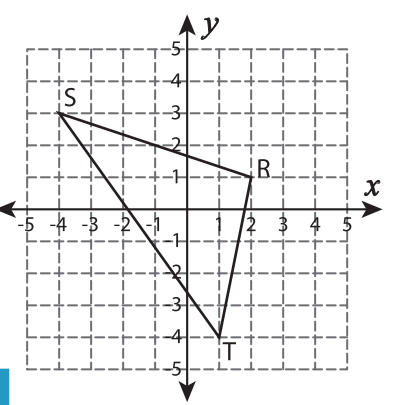
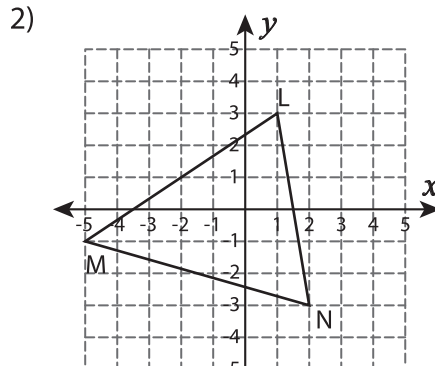
Identify the slope of each line segment, joined to form a triangle.



Slope of \overline{XY} = _____

Slope of \overline{YZ} = _____

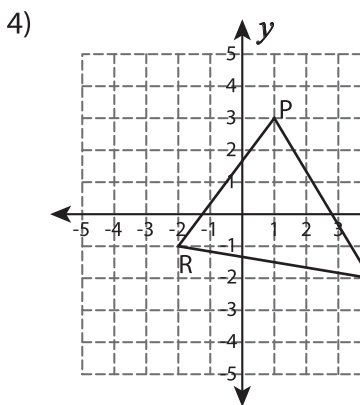
Slope of \overline{ZX} = _____



Slope of \overline{RS} = _____

Slope of \overline{ST} = _____

Slope of \overline{TR} = _____



Slope of \overline{PQ} = _____

Slope of \overline{QR} = _____

Slope of \overline{RP} = _____

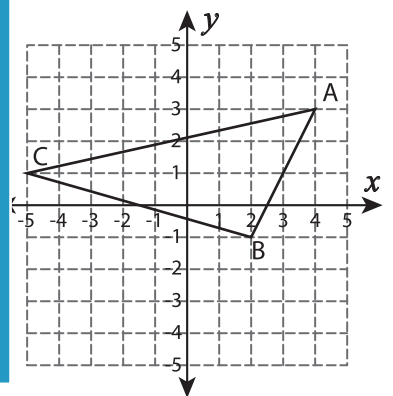
PREVIEW

Gain complete access to the largest
collection of worksheets in all subjects!

Members, please
log in to
download this
worksheet.

Not a member?
Please sign up to
gain complete
access.

www.mathworksheets4kids.com



Slope of \overline{UV} = _____

Slope of \overline{VW} = _____

Slope of \overline{WU} = _____

Slope of \overline{AB} = _____

Slope of \overline{BC} = _____

Slope of \overline{CA} = _____