

Name : _____

Communities

Label the communities as urban, suburban, or rural.


1)



2)





3)





5)





PREVIEW

Gain complete access to the largest collection of worksheets in all subjects!

Members, please log in to download this worksheet.

Not a member? Please sign up to gain complete access.

www.mathworksheets4kids.com