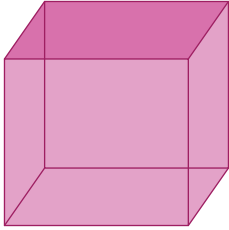


Name : _____

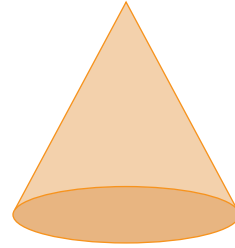
2D Shapes on 3D Figures

Identify the 2D shapes on 3D figures. Write how many of each make the 3D shape.

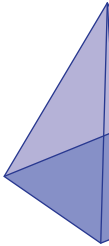
1)



2)



3)



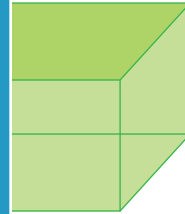
PREVIEW

Gain complete access to the largest collection of worksheets in all subjects!

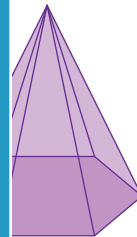
Members, please log in to download this worksheet.

Not a member? Please sign up to gain complete access.

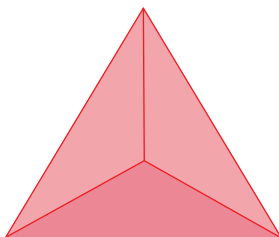
www.mathworksheets4kids.com



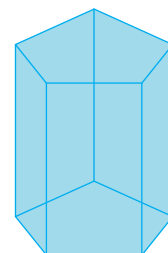
5)



7)



8)

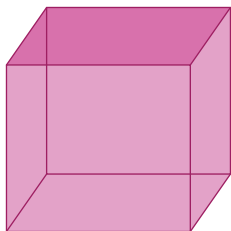


Name : _____

2D Shapes on 3D Figures

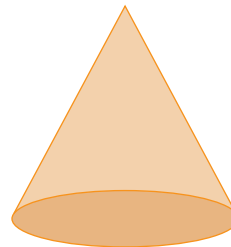
Identify the 2D shapes on 3D figures. Write how many of each make the 3D shape.

1)



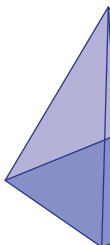
6 squares

2)




1 circle

3)



1 square and



rectangles

5)



2 cir

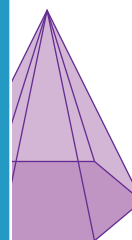
PREVIEW

Gain complete access to the largest collection of worksheets in all subjects!

Members, please log in to download this worksheet.

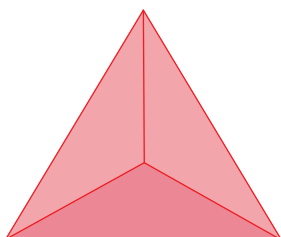
Not a member? Please sign up to gain complete access.

www.mathworksheets4kids.com



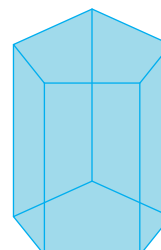
and 6 triangles

7)



4 triangles

8)



2 pentagons and 5 rectangles