

Name : _____

Sorting Plane & Solid Figures

Standard

Sort the figures in the box and write them in the appropriate columns.

Plane Figures	Solid Figures
_____ _____ _____ _____	_____ _____ _____ _____


PREVIEW

Gain complete access to the largest collection of worksheets in all subjects!

Members, please log in to download this worksheet.


Not a member? Please sign up to gain complete access.

www.mathworksheets4kids.com

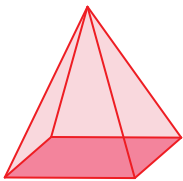


hexagon


cone



trapezoid




rectangular pyramid



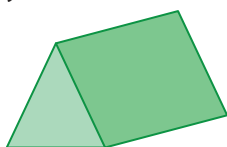
pentagonal prism



square



pentagon



triangular prism



parallelogram



hexagonal pyramid

Name : _____

Sorting Plane & Solid Figures

Standard

Sort the figures in the box and write them in the appropriate columns.

Plane Figures	Solid Figures
_____ hexagon _____	_____ rectangular pyramid _____
_____ parallelo _____	_____ onal prism _____
_____ squa _____	_____ one _____
_____ trapez _____	_____ lar prism _____
_____ pentag _____	_____ al pyramid _____

PREVIEW

Gain complete access to the largest collection of worksheets in all subjects!

Members, please log in to download this worksheet.

Not a member? Please sign up to gain complete access.

www.mathworksheets4kids.com

