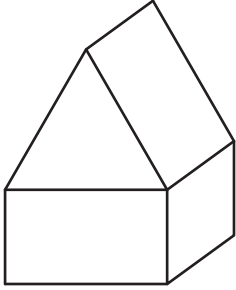


Name : _____


3D Shapes in Composite Figures

Identify and name the 3D shapes in each composite figure.

1)

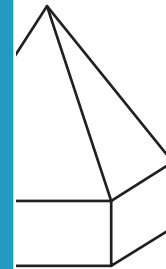


2)



3)





PREVIEW

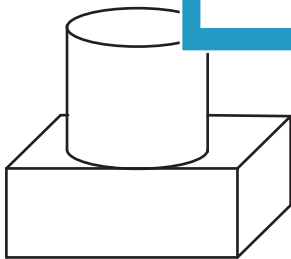
Gain complete access to the largest collection of worksheets in all subjects!

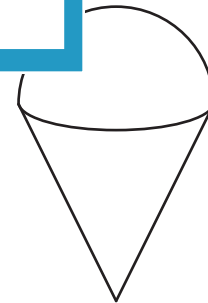
Members, please log in to download this worksheet.

Not a member? Please sign up to gain complete access.

www.mathworksheets4kids.com

5)



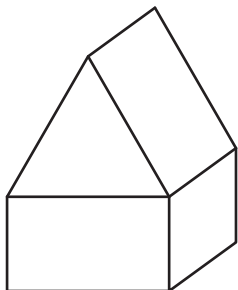


Name : _____

3D Shapes in Composite Figures


Identify and name the 3D shapes in each composite figure.

1)



triangular prism

2)



hemisphere

rectangular

cylinder

PREVIEW

Gain complete access to the largest collection of worksheets in all subjects!

Members, please log in to download this worksheet.

Not a member? Please sign up to gain complete access.

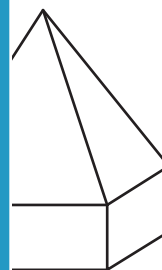
www.mathworksheets4kids.com

3)



cone

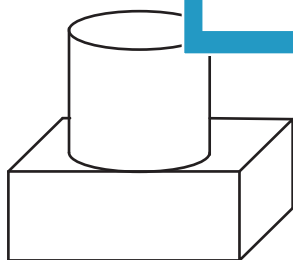
cylinder



triangular pyramid

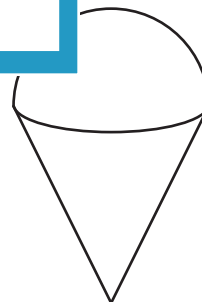
rectangular prism

5)



cylinder

rectangular prism



cone

hemisphere