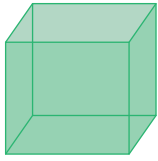


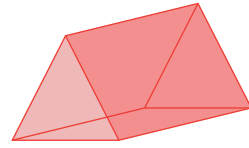
Name : _____

Comparing Faces, Edges, and Vertices

1)



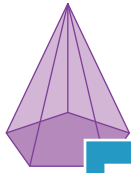
Number of vertices: _____



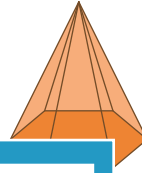
Number of vertices: _____

Which shape has fewer vertices?

2)



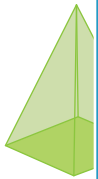
Number of edges: _____



Number of edges: _____

Which shape has more edges?

3)



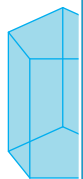
Number of faces: _____



Number of faces: _____

Which shape has more faces?

4)



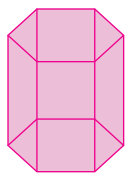
Number of vertices: _____



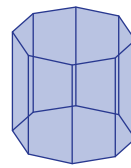
Number of vertices: _____

Which shape has more vertices?

5)



Number of faces: _____



Number of faces: _____

Which shape has fewer faces?

PREVIEW

Gain complete access to the largest collection of worksheets in all subjects!

Members, please log in to download this worksheet.

Not a member? Please sign up to gain complete access.

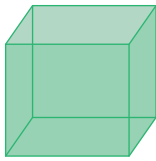
www.mathworksheets4kids.com

Answer key

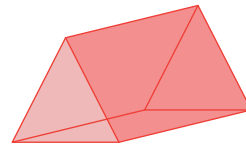
Name : _____

Comparing Faces, Edges, and Vertices

1)



Number of vertices: 8

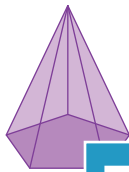


Number of vertices: 6

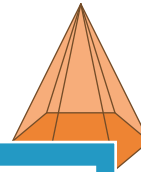
Which shape has fewer vertices?

triangular prism

2)



Number of edges: _____

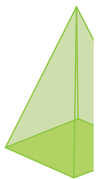


Number of edges: 12

Which shape has more edges?

square pyramid

3)



Number of faces: _____

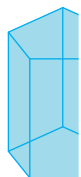


Number of faces: 6

Which shape has more faces?

rectangular prism

4)



Number of vertices: _____

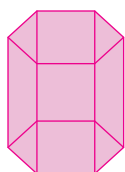


Number of vertices: 9

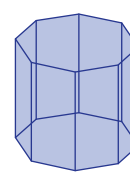
Which shape has more vertices?

pentagonal prism

5)



Number of faces: 8



Number of faces: 10

Which shape has fewer faces?

hexagonal prism

PREVIEW

Gain complete access to the largest collection of worksheets in all subjects!

Members, please log in to download this worksheet.

Not a member? Please sign up to gain complete access.

www.mathworksheets4kids.com