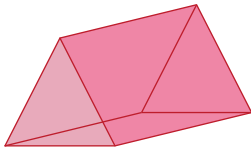


Name : \_\_\_\_\_

## Faces, Edges, and Vertices - MCQ

1) How many edges does this shape have?



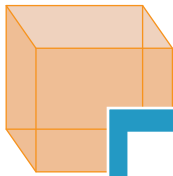
a) 6

b) 5

c) 8

d) 9

2) How many faces does this shape have?

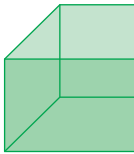


a) 6

b) 12

d) 10

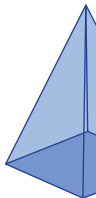
3) How many vertices does this shape have?



b) 8

d) 6

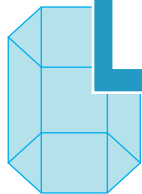
4) How many faces does this shape have?



b) 10

d) 4

5) How many edges does this shape have?

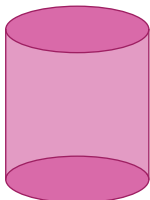


c) 18

b) 12

d) 24

6) How many vertices does this shape have?



a) 3

b) 6

c) 2

d) 0

# PREVIEW

Gain complete access to the largest collection of worksheets in all subjects!

Members, please log in to download this worksheet.

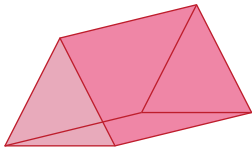
Not a member? Please sign up to gain complete access.

[www.mathworksheets4kids.com](http://www.mathworksheets4kids.com)

Name : \_\_\_\_\_

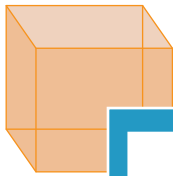
**Faces, Edges, and Vertices - MCQ**

1) How many edges does this shape have?



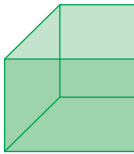
- a) 6
- b) 5
- c) 8
- d) 9

2) How many faces does this shape have?



- a) 6
- b) 12
- c) 8
- d) 10

3) How many vertices does this shape have?



**PREVIEW**

Gain complete access to the largest collection of worksheets in all subjects!

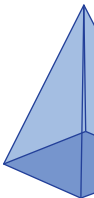
Members, please log in to download this worksheet.

Not a member? Please sign up to gain complete access.

[www.mathworksheets4kids.com](http://www.mathworksheets4kids.com)

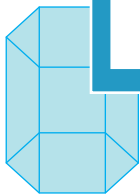
- b) 8
- c) 6
- d) 4

4) How many faces does this shape have?



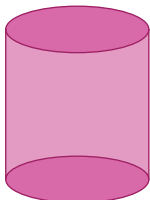
- b) 10
- c) 5
- d) 4

5) How many edges does this shape have?



- a) 12
- b) 18
- c) 24
- d) 30

6) How many vertices does this shape have?



- a) 3
- b) 6
- c) 2
- d) 0