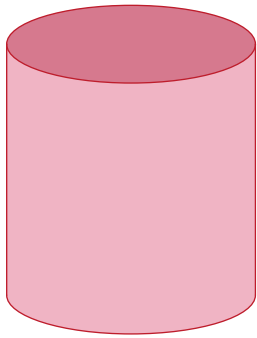


Name : \_\_\_\_\_

## What's My Name?

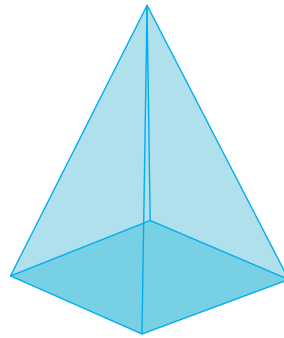
Identify the solid shapes choosing their names from the word box.

1)



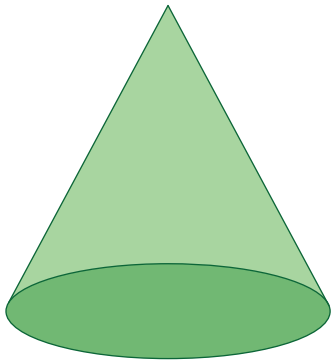
\_\_\_\_\_

2)




\_\_\_\_\_

3)




\_\_\_\_\_

4)



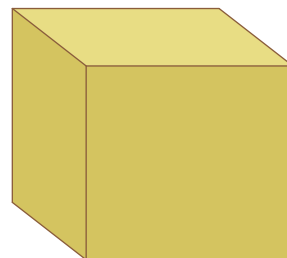
\_\_\_\_\_

5)



\_\_\_\_\_

6)



\_\_\_\_\_

cylinder

cone

pyramid

sphere

rectangular prism

cube

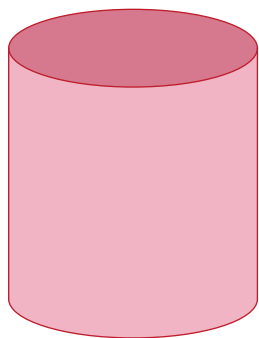
# Answer key

Name : \_\_\_\_\_

## What's My Name?

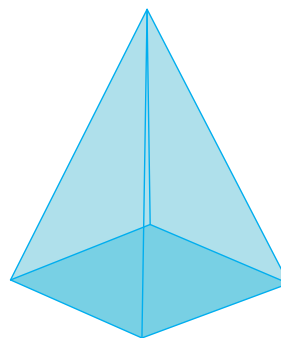
Identify the solid shapes choosing their names from the word box.

1)



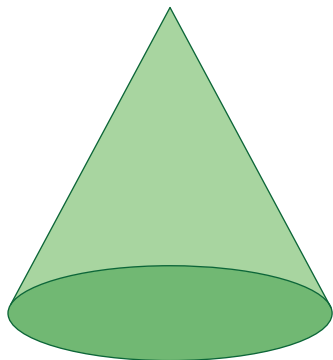
**cylinder**

2)




**pyramid**

3)




**cone**

4)



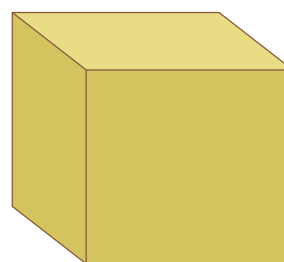
**sphere**

5)



**rectangular prism**

6)



**cube**

cylinder

cone

pyramid

sphere

rectangular prism

cube