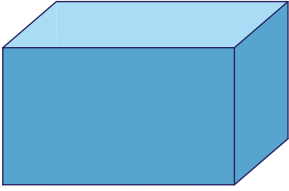


Name : \_\_\_\_\_

## Naming the Prisms & Pyramids

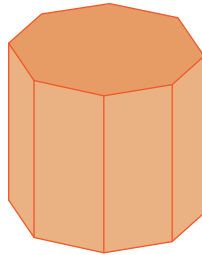
A) Identify and name each prism.

1)



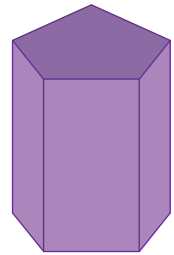
\_\_\_\_\_

2)



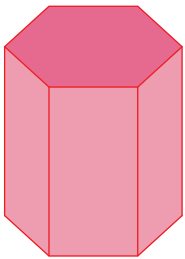
\_\_\_\_\_

3)

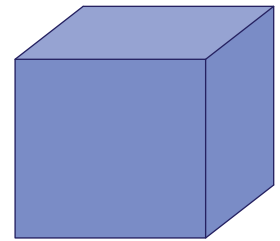


\_\_\_\_\_

4)



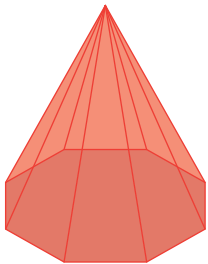
\_\_\_\_\_



\_\_\_\_\_

B) Identify and name

1)



\_\_\_\_\_

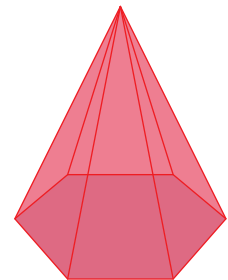
**PREVIEW**

Gain complete access to the largest collection of worksheets in all subjects!

Members, please log in to download this worksheet.

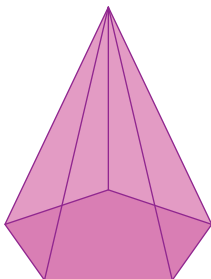
Not a member? Please sign up to gain complete access.

[www.mathworksheets4kids.com](http://www.mathworksheets4kids.com)



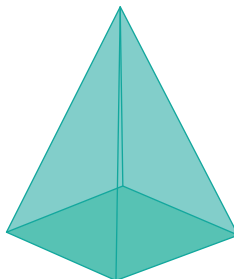
\_\_\_\_\_

4)



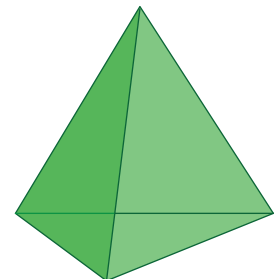
\_\_\_\_\_

5)



\_\_\_\_\_

6)



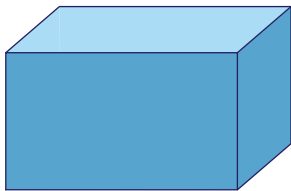
\_\_\_\_\_

Name : \_\_\_\_\_

## Naming the Prisms & Pyramids

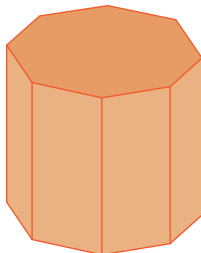
A) Identify and name each prism.

1)



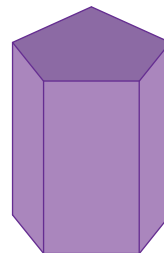
**rectangular prism**

2)



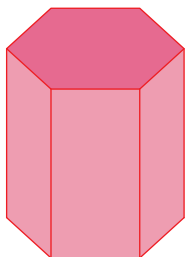
**octagonal prism**

3)

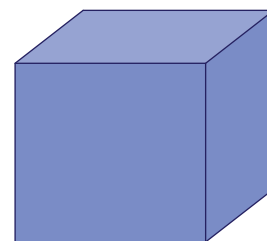


**pentagonal prism**

4)



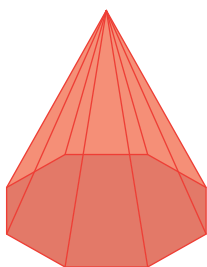
**hexagonal prism**



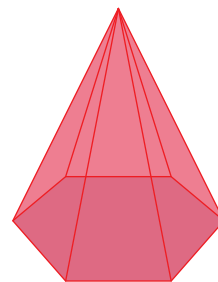
**cube**

B) Identify and name

1)

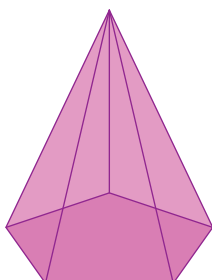


**octagonal pyramid**



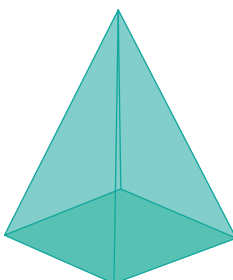
**hexagonal pyramid**

4)



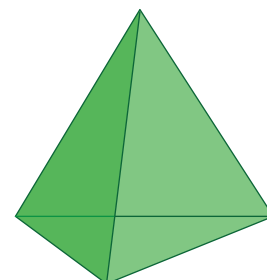
**pentagonal pyramid**

5)



**square pyramid**

6)



**triangular pyramid**

**PREVIEW**

Gain complete access to the largest collection of worksheets in all subjects!

Members, please log in to download this worksheet.

Not a member? Please sign up to gain complete access.

[www.mathworksheets4kids.com](http://www.mathworksheets4kids.com)