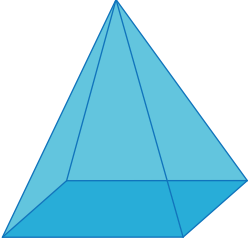


Name : _____

Identifying Prisms and Pyramids

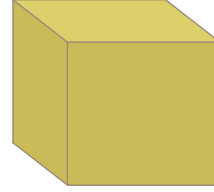
Check the option that best describes each prism and pyramid.

1)



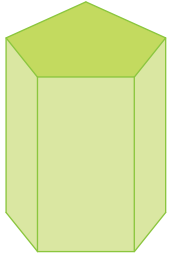
- rectangular pyramid
- octagonal prism
- square pyramid

2)



- hexagonal prism
- pentagonal pyramid
- cube

3)



-
-
-

PREVIEW

Gain complete access to the largest
collection of worksheets in all subjects!

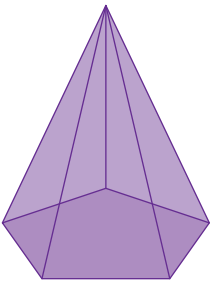
Members, please
log in to
download this
worksheet.

Not a member?
Please sign up to
gain complete
access.

www.mathworksheets4kids.com

- octagonal pyramid
- hexagonal pyramid
- hexagonal prism

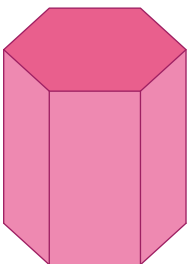
5)



-
-
-

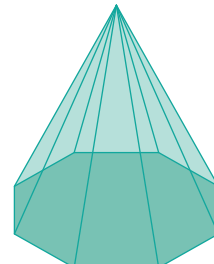
- rectangular prism
- octagonal prism
- triangular prism

7)



- pentagonal prism
- hexagonal prism
- hexagonal pyramid

8)



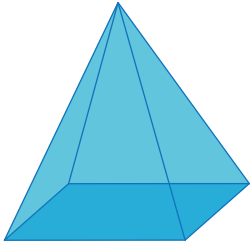
- octagonal pyramid
- square pyramid
- triangular pyramid

Name : _____

Identifying Prisms and Pyramids

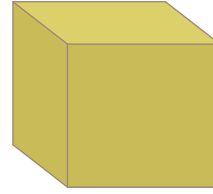
Check the option that best describes each prism and pyramid.

1)



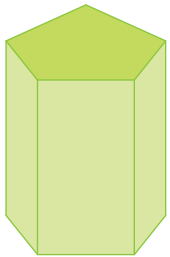
- rectangular pyramid
- octagonal prism
- square pyramid

2)



- hexagonal prism
- pentagonal pyramid
- cube

3)



-
-
-

PREVIEW

Gain complete access to the largest collection of worksheets in all subjects!

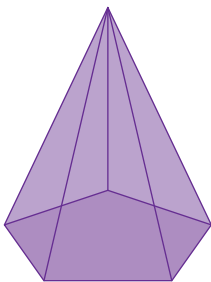
Members, please log in to download this worksheet.

Not a member? Please sign up to gain complete access.

www.mathworksheets4kids.com

- octagonal pyramid
- hexagonal pyramid
- hexagonal prism

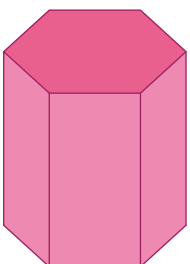
5)



-
-
-

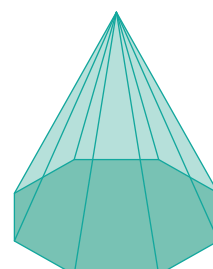
- rectangular prism
- octagonal prism
- triangular prism

7)



- pentagonal prism
- hexagonal prism
- hexagonal pyramid

8)



- octagonal pyramid
- square pyramid
- triangular pyramid