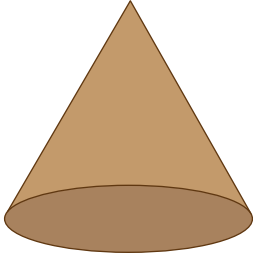


Name : _____

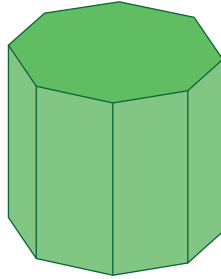
Naming 3D Shapes

Identify and name each 3D shape.

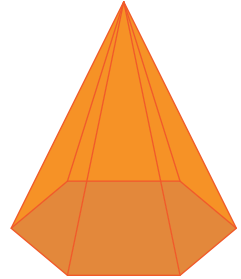
1)



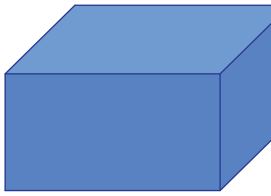
2)



3)



4)



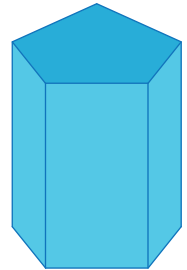
PREVIEW

Gain complete access to the largest collection of worksheets in all subjects!

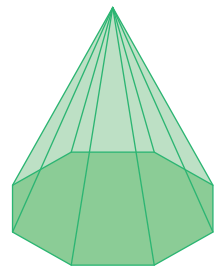
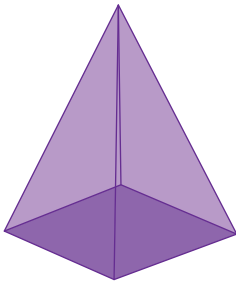
Members, please log in to download this worksheet.

Not a member? Please sign up to gain complete access.


www.mathworksheets4kids.com



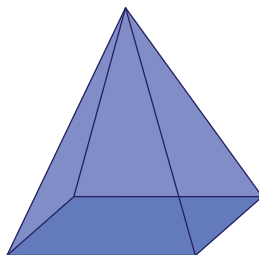
7)




10)



11)



12)

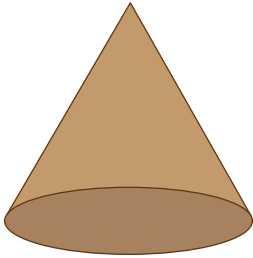


Name : _____

Naming 3D Shapes

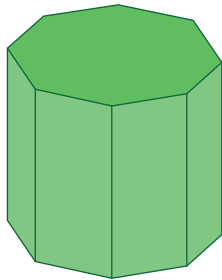
Identify and name each 3D shape.

1)



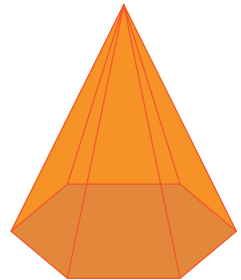
cone

2)



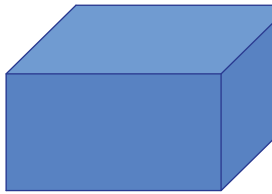
octagonal prism

3)



hexagonal pyramid

4)



rectangular prism

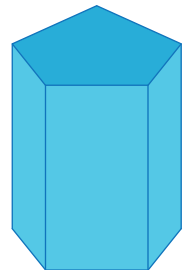
PREVIEW

Gain complete access to the largest collection of worksheets in all subjects!

Members, please log in to download this worksheet.

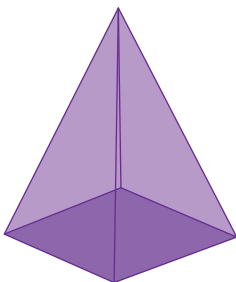
Not a member? Please sign up to gain complete access.

www.mathworksheets4kids.com

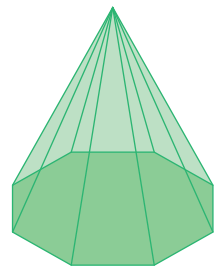


pentagonal prism

7)




square pyramid



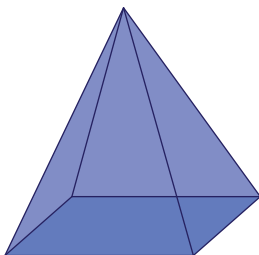
octagonal pyramid

10)




hexagonal prism

11)



rectangular pyramid

12)



hemisphere