


**Identify 2D or 3D Shape**

Sheet 1


Circle the correct choice:

1)




2D Shape / 3D Shape

2)




2D Shape / 3D Shape

3)




2D Shape / 3D Shape

4)



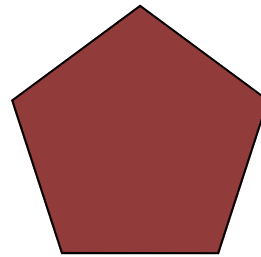
2D Shape / 3D Shape

5)




2D Shape / 3D Shape

6)



2D Shape / 3D Shape

7)



2D Shape / 3D Shape

8)



2D Shape / 3D Shape


**Answer key**

**Identify 2D or 3D Shape**

Sheet 1


Circle the correct choice:

1)




2D Shape / 3D Shape

2)




2D Shape / 3D Shape

3)




2D Shape / 3D Shape

4)



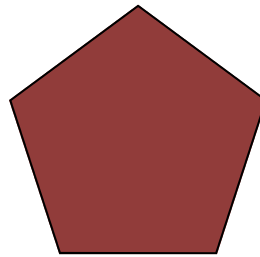
2D Shape / 3D Shape

5)




2D Shape / 3D Shape

6)



2D Shape / 3D Shape

7)



2D Shape / 3D Shape

8)



2D Shape / 3D Shape