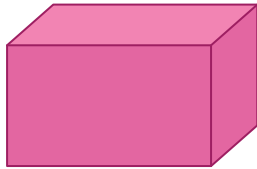


Name : _____

Movements of 3D Shapes


Choose the option that best describes the movement of each shape.

1)



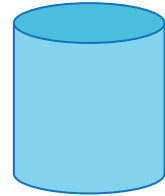
- stack and slide
- roll and slide
- stack and roll

2)




- stack and slide
- slide
- slide and roll

3)

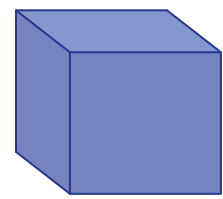


- slide and stack
- stack, slide, and roll
- stack and roll

4)



- slide and roll
- stack and slide
- roll and stack



- slide and roll
- roll and stack
- stack and slide

PREVIEW

Gain complete access to the largest collection of worksheets in all subjects!

Members, please log in to download this worksheet.

Not a member? Please sign up to gain complete access.


www.mathworksheets4kids.com

Name : _____

Movements of 3D Shapes


Choose the option that best describes the movement of each shape.

1)



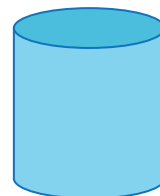
- stack and slide
- roll and slide
- stack and roll

2)



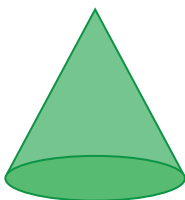
- stack and slide
- slide
- slide and roll

3)

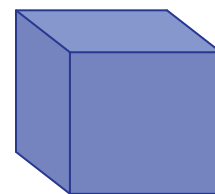


- slide and stack
- stack, slide, and roll
- stack and roll

4)



- slide and roll
- stack and slide
- roll and stack



- slide and roll
- roll and stack
- stack and slide

PREVIEW

Gain complete access to the largest collection of worksheets in all subjects!

Members, please log in to download this worksheet.

Not a member? Please sign up to gain complete access.

www.mathworksheets4kids.com