


Name : _____

Roll, Slide, & Stack

Test if each real-life 3D shape can roll, slide, or/and stack.

1)




Stack

Slide

Roll

2)




Slide

Roll

Stack

3)




Slide

4)



Slide

5)




Roll

Slide

Stack

6)



Slide

Stack

Roll

PREVIEW

Gain complete access to the largest collection of worksheets in all subjects!

Members, please log in to download this worksheet.

Not a member? Please sign up to gain complete access.

www.mathworksheets4kids.com


Answer key

Name : _____

Roll, Slide, & Stack

Test if each real-life 3D shape can roll, slide, or/and stack.

1)

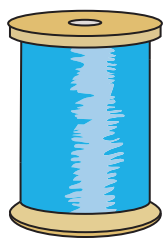


Stack

Slide

Roll

2)




Slide

Roll

Stack

3)




Slide

4)



Slide

5)




Roll

Slide

Stack

6)



Slide

Stack

Roll

PREVIEW

Gain complete access to the largest collection of worksheets in all subjects!

Members, please log in to download this worksheet.

Not a member? Please sign up to gain complete access.

www.mathworksheets4kids.com