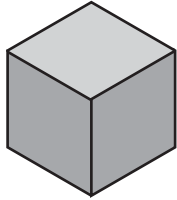


Name : \_\_\_\_\_

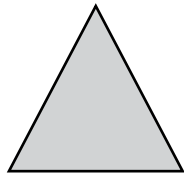
Score : \_\_\_\_\_

### Sorting 2D and 3D shapes

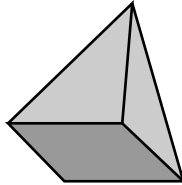
BS1



Cube




Triangle



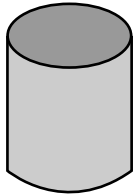
Pyramid



Rectangle




Circle



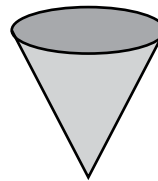
Cylinder




Square



Sphere



Cone



Diamond

List out the names of 2D and 3D shapes.

2D Shapes	3D Shapes
1) .....	1) .....
2) .....	2) .....
3) .....	3) .....
4) .....	4) .....
5) .....	5) .....


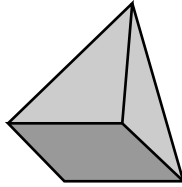
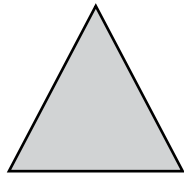
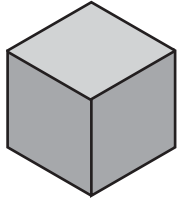
Name : \_\_\_\_\_

**Answer key**

Score : \_\_\_\_\_

**Sorting 2D and 3D shapes**

BS1




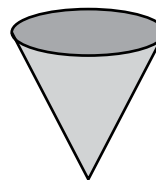


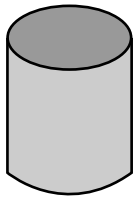
Cube

Triangle

Pyramid

Rectangle

Circle



Cylinder

Square

Sphere

Cone

Diamond

List out the names of 2D and 3D shapes.

2D Shapes	3D Shapes
1) <b>Triangle</b> -----	1) <b>Cube</b> -----
2) <b>Rectangle</b> -----	2) <b>Pyramid</b> -----
3) <b>Circle</b> -----	3) <b>Cylinder</b> -----
4) <b>Square</b> -----	4) <b>Sphere</b> -----
5) <b>Diamond</b> -----	5) <b>Cone</b> -----