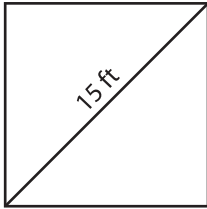


Name : _____

Area of a Square

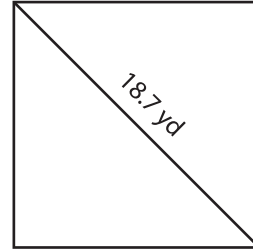
A) Find the area of each square. Round your answer to the nearest hundredth.

1)



Area = _____

2)



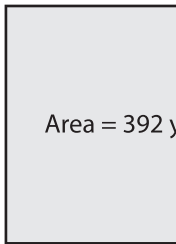
Area = _____

3) The diagonal of a square is _____.

4) The diagonal of a square is _____.

B) Find the length of the diagonal of a square.

5)



Diagonal = _____

PREVIEW

Gain complete access to the largest collection of worksheets in all subjects!

Members, please log in to download this worksheet.

Not a member? Please sign up to gain complete access.

www.mathworksheets4kids.com



Diagonal = _____

7) The area of a square is 338 square feet. Determine the length of the diagonal.

8) A square has an area of 111.01 square yards. Find the length of the diagonal.
