

Name : _____

Area of a Square

T1S1


Find the area of each square.

1)



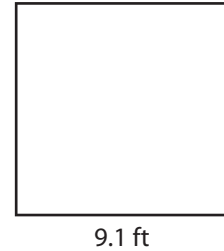
Area =

2)




Area =

3)



Area =

4)



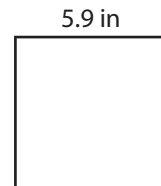
Area =

5)



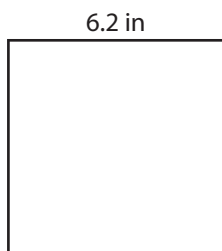
Area =

6)




Area =

7)




Area =

8)



Area =

9)



Area =

Name : _____

Answer key

Area of a Square

T1S1


Find the area of each square.

1)



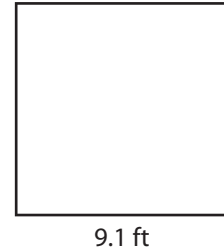
Area = **68.89 yd²**

2)




Area = **112.36 in²**

3)



Area = **82.81 ft²**

4)



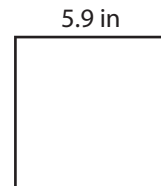
Area = **136.89 ft²**

5)



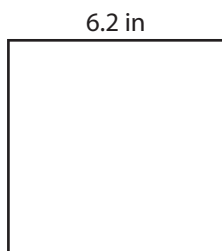
Area = **19.36 yd²**

6)




Area = **34.81 in²**

7)




Area = **38.44 in²**

8)



Area = **210.25 ft²**

9)



Area = **156.25 yd²**