

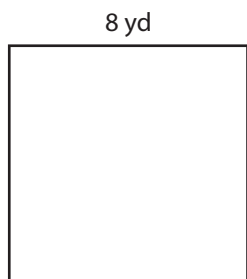
Name : _____

Area of a Square

T1L1S1


Find the area of each square.

1)



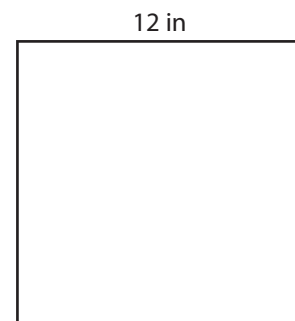
Area =

2)



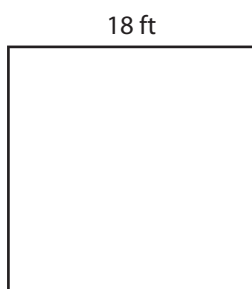
Area =

3)



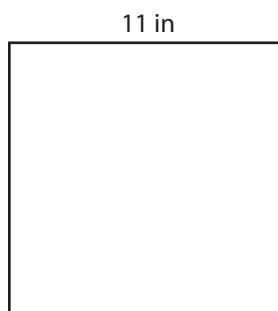
Area =

4)




Area =

5)




Area =

6)



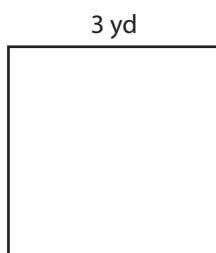
Area =

7)




Area =

8)



Area =

9)



Area =

Name : _____


Answer key

T1L1S1

Area of a Square


Find the area of each square.

1)



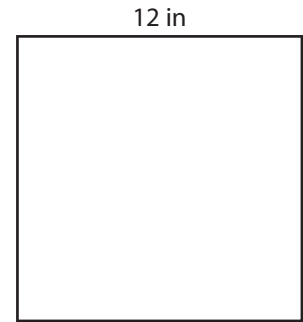
Area = **64 yd²**

2)




Area = **36 ft²**

3)




Area = **144 in²**

4)



Area = **324 ft²**

5)




Area = **121 in²**

6)




Area = **4 yd²**

7)




Area = **81 in²**

8)



Area = **9 yd²**

9)



Area = **289 ft²**