


Name : \_\_\_\_\_

## Perimeter of a Square

T1S3

Find the perimeter of each square.

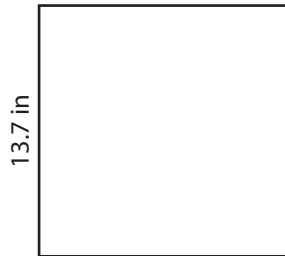
1)



8.1 ft

Perimeter =

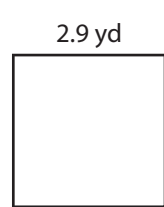
2)



13.7 in

Perimeter =

3)



2.9 yd

4)

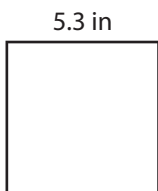


11.5 in

Perimeter =


Perimeter =

7)




5.3 in

Perimeter =



18.6 yd

Perimeter =



6.2 ft

Perimeter =

**PREVIEW**

Gain complete access to the largest collection of worksheets in all subjects!

Members, please log in to download this worksheet.

Not a member? Please sign up to gain complete access.

[www.mathworksheets4kids.com](http://www.mathworksheets4kids.com)

Name : \_\_\_\_\_


## Answer key

### Perimeter of a Square

T1S3

Find the perimeter of each square.

1)



8.1 ft

Perimeter = **32.4 ft**

2)



13.7 in

# PREVIEW

Gain complete access to the largest collection of worksheets in all subjects!

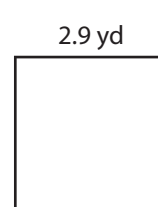
Members, please log in to download this worksheet.

Not a member? Please sign up to gain complete access.

[www.mathworksheets4kids.com](http://www.mathworksheets4kids.com)

Perimeter = **11.6 yd**

3)



2.9 yd

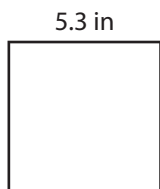
4)



Perimeter = **71.2 yd**

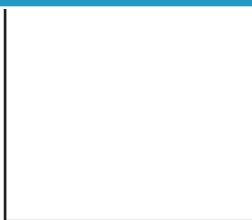
Perimeter = **46 in**

7)



5.3 in

Perimeter = **21.2 in**



18.6 yd

Perimeter = **74.4 yd**



6.2 ft

Perimeter = **24.8 ft**