

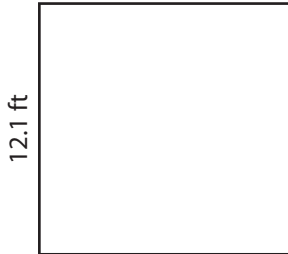
Name : _____

Perimeter of a Square

T1S4

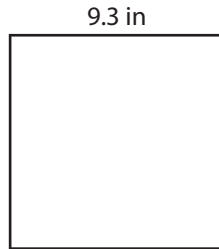
Find the perimeter of each square.

1)




Perimeter =

2)




Perimeter =

3)



4)



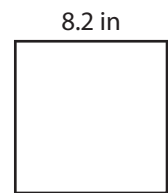
Perimeter =

PREVIEW
Gain complete access to the largest collection of worksheets in all subjects!

Members, please log in to download this worksheet.


Not a member? Please sign up to gain complete access.

www.mathworksheets4kids.com



Perimeter =

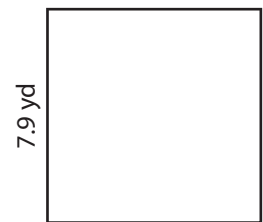
7)



Perimeter =



Perimeter =



Perimeter =

Name : _____

Answer key

Perimeter of a Square

T1S4


Find the perimeter of each square.

1)




Perimeter = **48.4 ft**

2)




3)



Perimeter = **62 yd**

4)



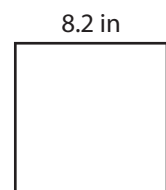
Perimeter = **81.6 in**

Gain complete access to the largest collection of worksheets in all subjects!

Members, please log in to download this worksheet.


Not a member? Please sign up to gain complete access.

www.mathworksheets4kids.com




Perimeter = **32.8 in**

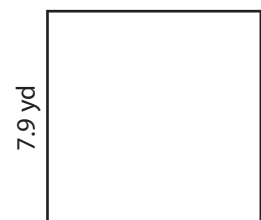
7)



Perimeter = **18.4 ft**



Perimeter = **47.2 ft**



Perimeter = **31.6 yd**