


Name : \_\_\_\_\_

## Perimeter of a Square

Sheet 2

Example :



$$\begin{aligned} \text{Perimeter} &= 16 \text{ ft} \\ \text{Perimeter} &= 4 \times \text{Side} \\ 16 \text{ ft} &= 4 \times \text{Side} \\ \frac{16}{4} &= \text{Side} \\ \text{Side} &= \mathbf{4 \text{ ft}} \end{aligned}$$

**Ans = 4 ft**

Find the side length of each square.

1)



Perimeter = 80 in

Side length =

2)




4)



Perimeter = 92 yd

Side length =

7)



Perimeter = 40 ft

Side length =

3)




Perimeter = 100 yd

length =



Perimeter = 12 ft

length =



Perimeter = 84 in

Side length =



Perimeter = 48 yd

Side length =

# PREVIEW

Gain complete access to the largest collection of worksheets in all subjects!

Members, please log in to download this worksheet.

Not a member? Please sign up to gain complete access.

[www.mathworksheets4kids.com](http://www.mathworksheets4kids.com)


Name : \_\_\_\_\_

## Answer key

Sheet 2

# Perimeter of a Square

Example :




$$\begin{aligned} \text{Perimeter} &= 16 \text{ ft} \\ \text{Perimeter} &= 4 \times \text{Side} \\ 16 \text{ ft} &= 4 \times \text{Side} \\ \frac{16}{4} &= \text{Side} \\ \text{Side} &= \mathbf{4 \text{ ft}} \end{aligned}$$

**Ans = 4 ft**

Find the side length of each square.

1)



Perimeter = 80 in

Side length = **20 in**

2)



Perimeter = 100 yd

Side length = **25 yd**

4)



Perimeter = 92 yd

Side length = **23 yd**



Perimeter = 12 ft


Side length = **3 ft**

7)



Perimeter = 40 ft

Side length = **10 ft**



Perimeter = 84 in

Side length = **21 in**



Perimeter = 48 yd

Side length = **12 yd**

**PREVIEW**

Gain complete access to the largest collection of worksheets in all subjects!

Members, please log in to download this worksheet.

Not a member? Please sign up to gain complete access.

[www.mathworksheets4kids.com](http://www.mathworksheets4kids.com)