

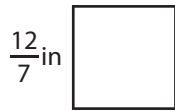
Name : _____

Perimeter of a Square

T1S2

Find the perimeter of each square.

1)



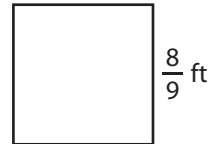
Perimeter =

2)

$1\frac{5}{16}$ yd

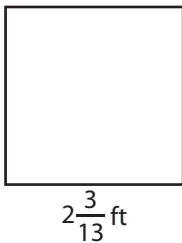


3)



Perimeter =

4)



Perimeter =


PREVIEW
Gain complete access to the largest collection of worksheets in all subjects!

Members, please log in to download this worksheet.

Not a member? Please sign up to gain complete access.

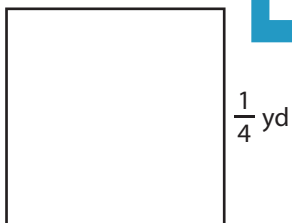
www.mathworksheets4kids.com

$\frac{1}{10}$ yd

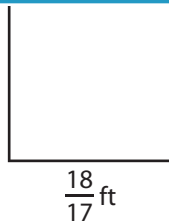


Perimeter =

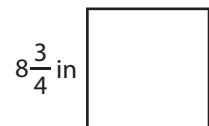
7)



Perimeter =



Perimeter =



Perimeter =

Name : _____

Answer key

Perimeter of a Square

T1S2

Find the perimeter of each square.

1)




Perimeter = $\frac{48}{7}$ or $6\frac{6}{7}$ in

2)

$1\frac{5}{16}$ yd



3)



Perimeter = $\frac{32}{9}$ or $3\frac{5}{9}$ ft

4)



Perimeter = $\frac{116}{13}$ or $8\frac{1}{13}$ ft


Gain complete access to the largest collection of worksheets in all subjects!

Members, please log in to download this worksheet.

Not a member? Please sign up to gain complete access.

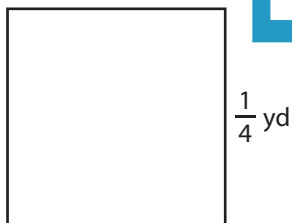
www.mathworksheets4kids.com

$\frac{1}{10}$ yd



Perimeter = $\frac{2}{5}$ yd

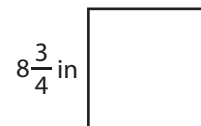
7)



Perimeter = 1 yd



Perimeter = $\frac{72}{17}$ or $4\frac{4}{17}$ ft



Perimeter = 35 in