


Name : _____

Perimeter of a Square

T1L1S1

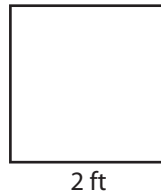
Find the perimeter of each square.

1)



Perimeter =

2)



Perimeter =

3)




Perimeter =

4)



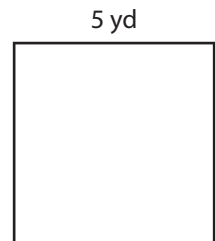
Perimeter =

5)




Perimeter =

6)



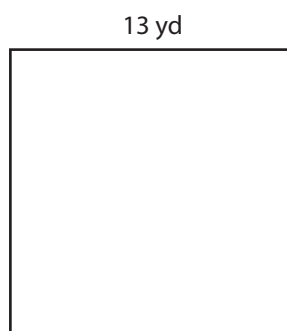
Perimeter =

7)




Perimeter =

8)



Perimeter =

9)



Perimeter =

Name : _____


Answer key

Perimeter of a Square

T1L1S1

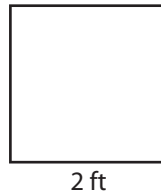
Find the perimeter of each square.

1)



Perimeter = **44 yd**

2)



Perimeter = **8 ft**

3)




Perimeter = **16 in**

4)



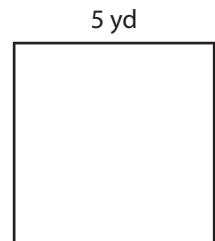
Perimeter = **24 ft**

5)




Perimeter = **72 in**

6)



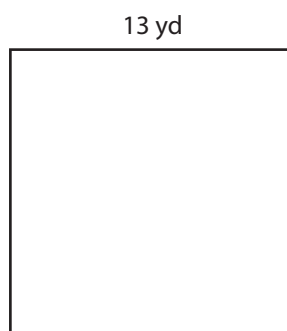
Perimeter = **20 yd**

7)




Perimeter = **36 in**

8)



Perimeter = **52 yd**

9)



Perimeter = **40 ft**