


Name : \_\_\_\_\_

## Perimeter of a Square

T1L1S2

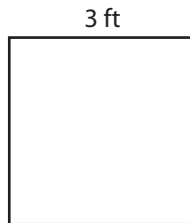
Find the perimeter of each square.

1)



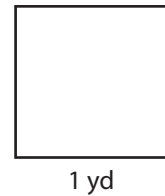
Perimeter =

2)




Perimeter =

3)



4)



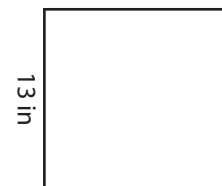
Perimeter =

Gain complete access to the largest collection of worksheets in all subjects!

Members, please log in to download this worksheet.

Not a member? Please sign up to gain complete access.

[www.mathworksheets4kids.com](http://www.mathworksheets4kids.com)

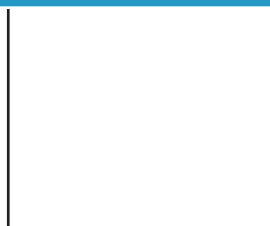


Perimeter =

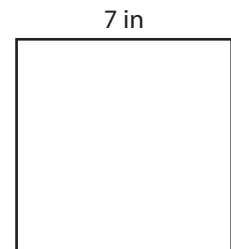
7)



Perimeter =



Perimeter =



Perimeter =

Name : \_\_\_\_\_


## Answer key

T1L1S2

### Perimeter of a Square

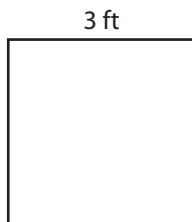
Find the perimeter of each square.

1)




Perimeter = **80 in**

2)




Perimeter = **4 yd**

3)



4)



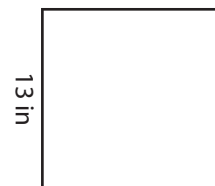
Perimeter = **36 ft**

Gain complete access to the largest collection of worksheets in all subjects!

Members, please log in to download this worksheet.


Not a member? Please sign up to gain complete access.

[www.mathworksheets4kids.com](http://www.mathworksheets4kids.com)

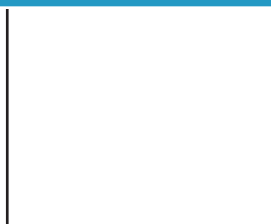


Perimeter = **52 in**

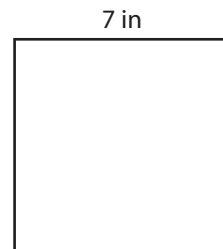
7)



Perimeter = **44 yd**



Perimeter = **56 ft**



Perimeter = **28 in**