

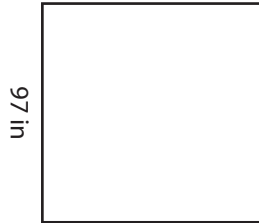
Name : _____

T1L2S5

Perimeter of a Square


Find the perimeter of each square.

1)




Perimeter =

2)

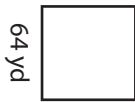


Perimeter =

3)



4)



Perimeter =

PREVIEW

Gain complete access to the largest collection of worksheets in all subjects!

Members, please log in to download this worksheet.

Not a member? Please sign up to gain complete access.

www.mathworksheets4kids.com




Perimeter =

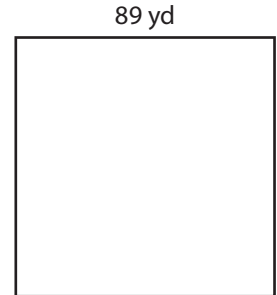
7)



Perimeter =



Perimeter =



Perimeter =

Name : _____

Answer key

T1L2S5

Perimeter of a Square

Find the perimeter of each square.

1)




Perimeter = **388 in**

2)



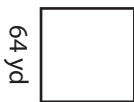
35 yd

3)



Perimeter = **64 ft**

4)



Perimeter = **256 yd**

Gain complete access to the largest collection of worksheets in all subjects!

Members, please log in to download this worksheet.

Not a member? Please sign up to gain complete access.

www.mathworksheets4kids.com



58 in


Perimeter = **232 in**

7)




77 ft

Perimeter = **308 ft**



42 in

Perimeter = **168 in**



89 yd

Perimeter = **356 yd**