


# Subtraction

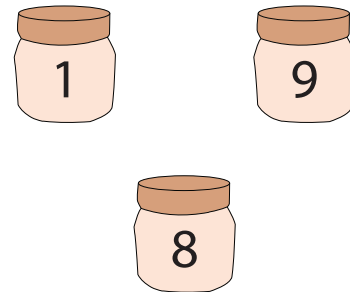
Sheet 3

Circle two numbers that need to be subtracted in each set to arrive at the answer (indicated as the third number).

1)



2)



3)



5)



7)



8)



# PREVIEW

Gain complete access to the largest collection of worksheets in all subjects!

Members, please log in to download this worksheet.

Not a member? Please sign up to gain complete access.

[www.mathworksheets4kids.com](http://www.mathworksheets4kids.com)

# Subtraction

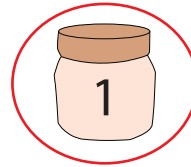
Sheet 3

Circle two numbers that need to be subtracted in each set to arrive at the answer (indicated as the third number). **Answers may vary.**

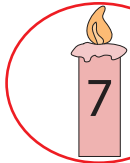
1)



2)



3)



5)



# PREVIEW

Gain complete access to the largest collection of worksheets in all subjects!

Members, please log in to download this worksheet.

Not a member? Please sign up to gain complete access.

[www.mathworksheets4kids.com](http://www.mathworksheets4kids.com)

7)



8)

