

# Subtraction

Column 0-10: T2S1

$$\begin{array}{r} 1) \quad 8 \\ - 3 \\ \hline \end{array}$$

$$\begin{array}{r} 2) \quad 3 \\ - 1 \\ \hline \end{array}$$

$$\begin{array}{r} 3) \quad 5 \\ - 4 \\ \hline \end{array}$$

$$\begin{array}{r} 4) \quad 10 \\ - 2 \\ \hline \end{array}$$

$$\begin{array}{r} 5) \quad 1 \\ - 1 \\ \hline \end{array}$$

$$\begin{array}{r} 6) \quad 10 \\ - 1 \\ \hline \end{array}$$

$$\begin{array}{r} 7) \quad 8 \\ - 1 \\ \hline \end{array}$$

$$\begin{array}{r} 8) \quad 2 \\ - 0 \\ \hline \end{array}$$

$$\begin{array}{r} 9) \quad 6 \\ - 2 \\ \hline \end{array}$$

$$\begin{array}{r} 12) \quad 9 \\ - 6 \\ \hline \end{array}$$

## PREVIEW

Gain complete access to the largest collection of worksheets in all subjects!

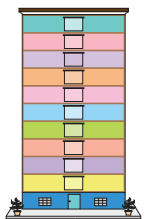
Members, please log in to download this worksheet.

Not a member? Please sign up to gain complete access.

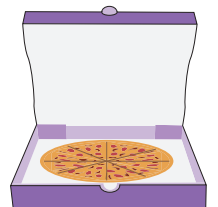
[www.mathworksheets4kids.com](http://www.mathworksheets4kids.com)

13) Smith assem  
blocks off, h

he takes 3 building



14) Olivia shares 5 slices of pepperoni pizza with her friend. If there were 8 slices in total, how many slices remain?



**Subtraction**

Column 0-10: T2S1

$$\begin{array}{r} 1) \quad 8 \\ - 3 \\ \hline 5 \end{array}$$

$$\begin{array}{r} 2) \quad 3 \\ - 1 \\ \hline 2 \end{array}$$

$$\begin{array}{r} 3) \quad 5 \\ - 4 \\ \hline 1 \end{array}$$

$$\begin{array}{r} 4) \quad 10 \\ - 2 \\ \hline 8 \end{array}$$

$$\begin{array}{r} 5) \quad 1 \\ - 1 \\ \hline 0 \end{array}$$

$$6) \quad 10$$

$$7) \quad 8$$

$$\begin{array}{r} 8) \quad 2 \\ - 0 \\ \hline 2 \end{array}$$

$$\begin{array}{r} 9) \quad 6 \\ - 2 \\ \hline 4 \end{array}$$

$$\begin{array}{r} 12) \quad 9 \\ - 6 \\ \hline 3 \end{array}$$

**PREVIEW**

Gain complete access to the largest collection of worksheets in all subjects!

Members, please log in to download this worksheet.

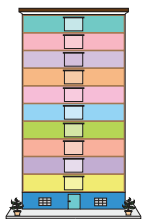
Not a member? Please sign up to gain complete access.

[www.mathworksheets4kids.com](http://www.mathworksheets4kids.com)

- 13) Smith assem  
blocks off, h

**6 blocks tall**

he takes 3 building



- 14) Olivia shares 5 slices of pepperoni pizza with her friend. If there were 8 slices in total, how many slices remain?

**3 slices**