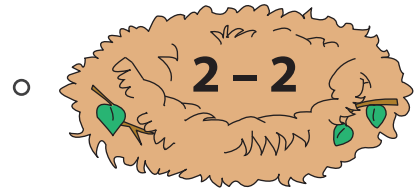
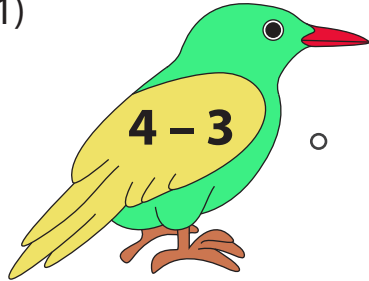


# Equivalent Subtraction Sentence

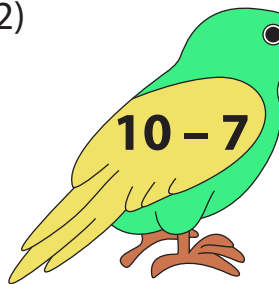
Sheet 1

Match the subtraction sentences on the left to the equivalent ones on the right.

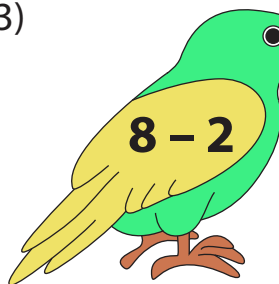
1)



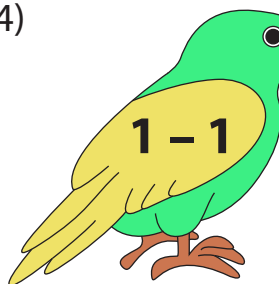
2)





3)



4)



5)



## PREVIEW

Gain complete access to the largest  
collection of worksheets in all subjects!

Members, please  
log in to  
download this  
worksheet.

Not a member?  
Please sign up to  
gain complete  
access.


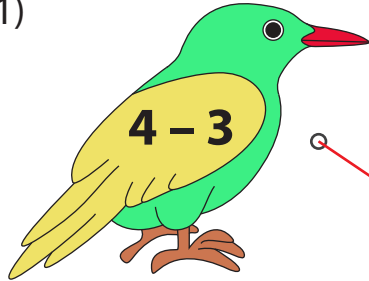
[www.mathworksheets4kids.com](http://www.mathworksheets4kids.com)

**Equivalent Subtraction Sentence**

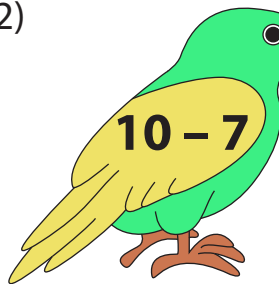
Sheet 1

Match the subtraction sentences on the left to the equivalent ones on the right.

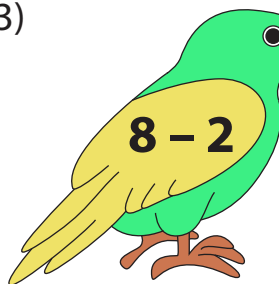
1)




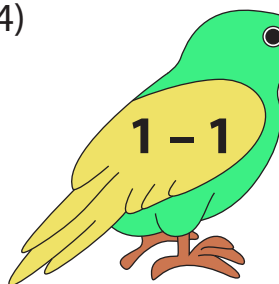
2)




3)



4)



5)



**PREVIEW**

Gain complete access to the largest collection of worksheets in all subjects!

Members, please log in to download this worksheet.

Not a member? Please sign up to gain complete access.

[www.mathworksheets4kids.com](http://www.mathworksheets4kids.com)