


Equivalent Subtraction Sentence

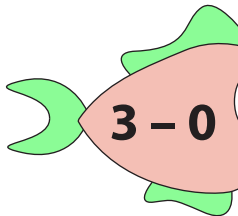
Sheet 3

Match the subtraction sentences on the left to the equivalent ones on the right.

1)



2)



PREVIEW

Gain complete access to the largest collection of worksheets in all subjects!

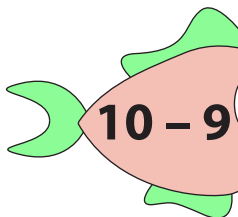
Members, please log in to download this worksheet.

Not a member? Please sign up to gain complete access.

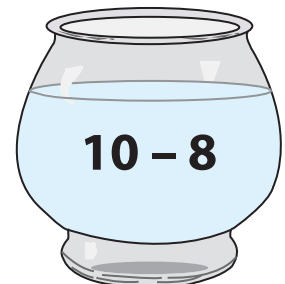
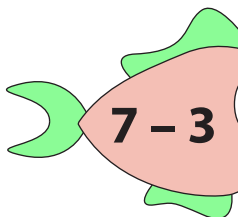
www.mathworksheets4kids.com




3)



4)



5)




Equivalent Subtraction Sentence

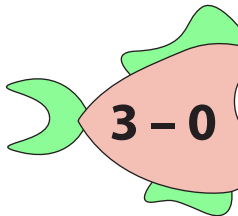
Sheet 3

Match the subtraction sentences on the left to the equivalent ones on the right.

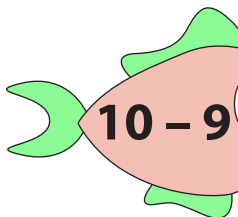
1)



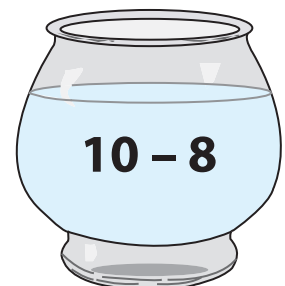
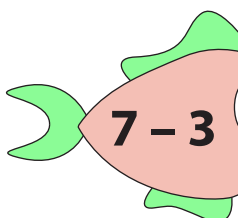
2)



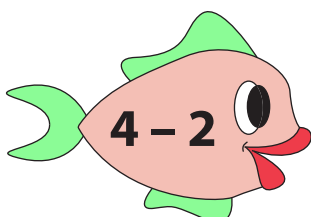
3)



4)



5)



PREVIEW

Gain complete access to the largest
collection of worksheets in all subjects!

Members, please
log in to
download this
worksheet.

Not a member?
Please sign up to
gain complete
access.

www.mathworksheets4kids.com