

Subtraction

Horizontal 0-10: T2S1

1) $3 - 0 =$

2) $7 - 5 =$

3) $10 - 5 =$

4) $4 - 3 =$

5) $1 -$

4 =

7) $6 -$

2 =

9) $9 -$

0 =

PREVIEW

Gain complete access to the largest collection of worksheets in all subjects!


Members, please log in to download this worksheet.

Not a member? Please sign up to gain complete access.


www.mathworksheets4kids.com

11) Catherine had 10 pretzels and ate 5. How many pretzels are left?

Michael has 10 pretzels and ate 5. How many pretzels are left?



12) Anne's pencil is 7 inches long. If she shaves 2 inches off it, how long does the pencil measure now?



Answer key**Subtraction**

Horizontal 0-10: T2S1

1) $3 - 0 = 3$

2) $7 - 5 = 2$

3) $10 - 5 = 5$

4) $4 - 3 = 1$

5) $1 -$

$4 = 4$

7) $6 -$

$2 = 0$

9) $9 -$

$0 = 5$

PREVIEW

Gain complete access to the largest collection of worksheets in all subjects!


Members, please log in to download this worksheet.

Not a member? Please sign up to gain complete access.


www.mathworksheets4kids.com

11) Catherine had 10 pretzels and ate 3. How many pretzels are left?

Michael has 12 pretzels and ate 5. How many pretzels are left?

**7 pretzels**

12) Anne's pencil is 7 inches long. If she shaves 2 inches off it, how long does the pencil measure now?

**5 inches**