


Missing Numbers



Horizontal 0-10: S3

Find the missing number in each problem.

1) - 5 = 5

2) 9 - = 3

3) 9 - = 1

4) - 1 = 7

5) -

= 0

7) 10 -

1 = 5

9) 8 -

= 8

11) -

= 1

13) 7 -

6 = 4

15) - 1 = 3

16) - 0 = 7

17) 6 - = 0

18) 2 - = 1

19) - 1 = 6

20) - 0 = 5

PREVIEW


Gain complete access to the largest collection of worksheets in all subjects!

Members, please log in to download this worksheet.


Not a member? Please sign up to gain complete access.

www.mathworksheets4kids.com

Answer key



Missing Numbers



Horizontal 0-10: S3

Find the missing number in each problem.

1) $\boxed{10} - 5 = 5$

2) $9 - \boxed{6} = 3$

3) $9 - \boxed{8} = 1$

4) $\boxed{8} - 1 = 7$

5) $\boxed{5} -$

$\boxed{3} = 0$

7) $10 -$

$1 = 5$

9) $8 -$

$\boxed{2} = 8$

11) $\boxed{9} -$

$\boxed{0} = 1$

13) $7 -$

$6 = 4$

15) $\boxed{4} - 1 = 3$

16) $\boxed{7} - 0 = 7$

17) $6 - \boxed{6} = 0$

18) $2 - \boxed{1} = 1$

19) $\boxed{7} - 1 = 6$

20) $\boxed{5} - 0 = 5$

PREVIEW

Gain complete access to the largest collection of worksheets in all subjects!

Members, please log in to download this worksheet.

Not a member? Please sign up to gain complete access.

www.mathworksheets4kids.com