

Subtraction

Column 0-20: T2S1

$$\begin{array}{r} 1) \quad 15 \\ - \quad 1 \\ \hline \end{array}$$

$$\begin{array}{r} 2) \quad 20 \\ - \quad 12 \\ \hline \end{array}$$

$$\begin{array}{r} 3) \quad 5 \\ - \quad 5 \\ \hline \end{array}$$

$$\begin{array}{r} 4) \quad 19 \\ - \quad 3 \\ \hline \end{array}$$

$$\begin{array}{r} 5) \quad 8 \\ - \quad 3 \\ \hline \end{array}$$

$$6) \quad 18$$

$$7) \quad 16$$

$$\begin{array}{r} 8) \quad 14 \\ - \quad 12 \\ \hline \end{array}$$

$$\begin{array}{r} 9) \quad 17 \\ - \quad 4 \\ \hline \end{array}$$

$$\begin{array}{r} 12) \quad 20 \\ - \quad 0 \\ \hline \end{array}$$

PREVIEW

Access the largest collection of
worksheets for just **\$19.95** per year!

Members, please
log in to
download this
worksheet.

Log in

Not a member?
Please sign up to
gain complete
access.

Sign up

www.mathworksheets4kids.com

13) Shaun has 8 books. How many books are left?

How many books are left? He read 5 of them. How



14) Kate has 12 popsicles. She gave 6 of them to her classmates. How many popsicles is Kate left with?



Subtraction

Column 0-20: T2S1

$$\begin{array}{r} 1) \quad 15 \\ - \quad 1 \\ \hline \quad 14 \end{array}$$

$$\begin{array}{r} 2) \quad 20 \\ - \quad 12 \\ \hline \quad \quad 8 \end{array}$$

$$\begin{array}{r} 3) \quad 5 \\ - \quad 5 \\ \hline \quad \quad 0 \end{array}$$

$$\begin{array}{r} 4) \quad 19 \\ - \quad 3 \\ \hline \quad 16 \end{array}$$

$$\begin{array}{r} 5) \quad 8 \\ - \quad 3 \\ \hline \quad 5 \end{array}$$

$$6) \quad 18$$

$$7) \quad 16$$

$$\begin{array}{r} 8) \quad 14 \\ - \quad 12 \\ \hline \quad 2 \end{array}$$

$$\begin{array}{r} 9) \quad 17 \\ - \quad 4 \\ \hline \quad 13 \end{array}$$

Access the largest collection of
worksheets for just **\$19.95** per year!

Members, please
log in to
download this
worksheet.

Log in

Not a member?
Please sign up to
gain complete
access.

Sign up

www.mathworksheets4kids.com

$$\begin{array}{r} 12) \quad 20 \\ - \quad 0 \\ \hline \quad 20 \end{array}$$

- 13) Shaun has 8 books on the shelf. He borrowed 5 of them. How many books remain on the shelf?

How many books remain on the shelf?

3 books remain on the shelf



- 14) Kate has 12 popsicles. She gave 6 of them to her classmates. How many popsicles is Kate left with?

She has 6 popsicles left



Subtraction

Column 0-20: T2S2

$$\begin{array}{r} 1) \quad 14 \\ - \quad 4 \\ \hline \end{array}$$

$$\begin{array}{r} 2) \quad 18 \\ - \quad 0 \\ \hline \end{array}$$

$$\begin{array}{r} 3) \quad 15 \\ - \quad 12 \\ \hline \end{array}$$

$$\begin{array}{r} 4) \quad 20 \\ - \quad 5 \\ \hline \end{array}$$

$$\begin{array}{r} 5) \quad 18 \\ - \quad 11 \\ \hline \end{array}$$

$$\begin{array}{r} 6) \quad 12 \\ \hline \end{array}$$

$$\begin{array}{r} 7) \quad 8 \\ \hline \end{array}$$

$$\begin{array}{r} 8) \quad 17 \\ - \quad 6 \\ \hline \end{array}$$

$$\begin{array}{r} 9) \quad 9 \\ - \quad 7 \\ \hline \end{array}$$

$$\begin{array}{r} 12) \quad 19 \\ - \quad 10 \\ \hline \end{array}$$

Access the largest collection of
worksheets for just **\$19.95** per year!

Members, please
log in to
download this
worksheet.

Log in

Not a member?
Please sign up to
gain complete
access.

Sign up

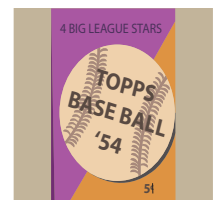
www.mathworksheets4kids.com

them with his friends.



- 13) Joe has a collection of baseball cards. How many more does he have than Alina?

- 14) Hugh has 20 baseball cards and Alina has 15. How many more baseball cards does Hugh have than Alina?



Subtraction

Column 0-20: T2S2

$$\begin{array}{r} 1) \quad 14 \\ - \quad 4 \\ \hline \quad 10 \end{array}$$

$$\begin{array}{r} 2) \quad 18 \\ - \quad 0 \\ \hline \quad 18 \end{array}$$

$$\begin{array}{r} 3) \quad 15 \\ - \quad 12 \\ \hline \quad \quad 3 \end{array}$$

$$\begin{array}{r} 4) \quad 20 \\ - \quad 5 \\ \hline \quad 15 \end{array}$$

$$\begin{array}{r} 5) \quad 18 \\ - \quad 11 \\ \hline \quad \quad 7 \end{array}$$

$$6) \quad 12$$

$$7) \quad 8$$

$$\begin{array}{r} 8) \quad 17 \\ - \quad 6 \\ \hline \quad 11 \end{array}$$

$$\begin{array}{r} 9) \quad 9 \\ - \quad 7 \\ \hline \quad 2 \end{array}$$

Access the largest collection of worksheets for just **\$19.95** per year!

Members, please log in to download this worksheet.

Log in

Not a member? Please sign up to gain complete access.

Sign up

www.mathworksheets4kids.com

$$\begin{array}{r} 12) \quad 19 \\ - \quad 10 \\ \hline \quad 9 \end{array}$$

- 13) Joe has a collection of 18 toy pistols. How many toy pistols does he have left if he gives 4 of them with his friends.

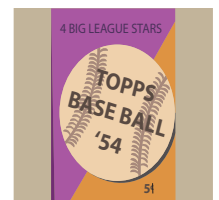
them with his friends.



4 toy pistols

- 14) Hugh has 20 baseball cards and Alina has 15. How many more baseball cards does Hugh have than Alina?

Hugh has 5 more cards than Alina



Subtraction

Column 0-20: T2S3

$$\begin{array}{r} 1) \quad 11 \\ - 11 \\ \hline \end{array}$$

$$\begin{array}{r} 2) \quad 15 \\ - 3 \\ \hline \end{array}$$

$$\begin{array}{r} 3) \quad 19 \\ - 0 \\ \hline \end{array}$$

$$\begin{array}{r} 4) \quad 20 \\ - 10 \\ \hline \end{array}$$

$$\begin{array}{r} 5) \quad 19 \\ - 6 \\ \hline \end{array}$$

$$\begin{array}{r} 6) \quad 17 \\ - 7 \\ \hline \end{array}$$

$$\begin{array}{r} 7) \quad 6 \\ - 6 \\ \hline \end{array}$$

$$\begin{array}{r} 8) \quad 18 \\ - 2 \\ \hline \end{array}$$

$$\begin{array}{r} 9) \quad 16 \\ - 1 \\ \hline \end{array}$$

$$\begin{array}{r} 12) \quad 12 \\ - 4 \\ \hline \end{array}$$

PREVIEW

Access the largest collection of
worksheets for just **\$19.95** per year!

Members, please
log in to
download this
worksheet.

Log in

Not a member?
Please sign up to
gain complete
access.

Sign up


www.mathworksheets4kids.com

- 13) Mathew had 10
How much more

favoured cake for \$4.



- 14) Marcus has a collection of 15 pink and yellow toy cars. If 7 of them were yellow, how many were pink?



Subtraction

Column 0-20: T2S3

$$\begin{array}{r} 1) \quad 11 \\ - 11 \\ \hline 0 \end{array}$$

$$\begin{array}{r} 2) \quad 15 \\ - 3 \\ \hline 12 \end{array}$$

$$\begin{array}{r} 3) \quad 19 \\ - 0 \\ \hline 19 \end{array}$$

$$\begin{array}{r} 4) \quad 20 \\ - 10 \\ \hline 10 \end{array}$$

$$\begin{array}{r} 5) \quad 19 \\ - 6 \\ \hline 13 \end{array}$$

$$6) \quad 17$$

$$7) \quad 6$$

$$\begin{array}{r} 8) \quad 18 \\ - 2 \\ \hline 16 \end{array}$$

$$\begin{array}{r} 9) \quad 16 \\ - 1 \\ \hline 15 \end{array}$$

$$\begin{array}{r} 12) \quad 12 \\ - 4 \\ \hline 8 \end{array}$$

PREVIEW

Access the largest collection of worksheets for just **\$19.95** per year!

Members, please log in to download this worksheet.

Log in

Not a member? Please sign up to gain complete access.


Sign up

www.mathworksheets4kids.com

13) Mathew had \$20.
How much money does he have left?

He has \$13

11) A chocolate cake costs \$5.
A vanilla cake costs \$3.
How much more does the chocolate cake cost than the vanilla cake?



14) Marcus has a collection of 15 pink and yellow toy cars. If 7 of them were yellow, how many were pink?

8 toy cars were pink

