

Name : _____

Score : _____



Subtraction

Horizontal 0-20: T1S1

1) $16 - 2 =$

2) $19 - 9 =$

3) $15 - 4 =$

4) $18 - 1 =$

5) $8 - 7 =$

6) $19 - 12 =$

7) $20 - 0 =$

8) $18 - 2 =$

9) $8 - 6 =$

10) $17 - 12 =$

11) $11 - 3 =$

12) $14 - 1 =$

13) $14 - 10 =$

14) $16 - 13 =$

15) $20 - 11 =$

Name : _____

Score : _____



Answer key

Subtraction

Horizontal 0-20: T1S1

1) $16 - 2 = 14$

2) $19 - 9 = 10$

3) $15 - 4 = 11$

4) $18 - 1 = 17$

5) $8 - 7 = 1$

6) $19 - 12 = 7$

7) $20 - 0 = 20$

8) $18 - 2 = 16$

9) $8 - 6 = 2$

10) $17 - 12 = 5$

11) $11 - 3 = 8$

12) $14 - 1 = 13$

13) $14 - 10 = 4$

14) $16 - 13 = 3$

15) $20 - 11 = 9$

Name : _____

Score : _____



Subtraction

Horizontal 0-20: T1S2

1) $18 - 17 =$

2) $16 - 12 =$

3) $20 - 2 =$

4) $9 - 1 =$

6) $11 - 8 =$

7) $17 - 2 =$

8) $19 - 10 =$

10) $12 - 10 =$

9) $13 - 1 =$

13) $20 - 14 =$

14) $14 - 3 =$

15) $18 - 13 =$

PREVIEW

Access the largest collection of
worksheets for just **\$19.95** per year!

Members, please
log in to
download this
worksheet.

Log in

Not a member?
Please sign up to
gain complete
access.

Sign up

www.mathworksheets4kids.com

**Answer key****Subtraction**

Horizontal 0-20: T1S2

1) $18 - 17 = 1$

2) $16 - 12 = 4$

3) $20 - 2 = 18$

4) $9 - 1 = 8$

PREVIEW

5) $11 - 8 = 3$

Access the largest collection of
worksheets for just **\$19.95** per year!

7) $17 - 2 = 15$

Members, please
log in to
download this
worksheet.

Log in

Not a member?
Please sign up to
gain complete
access.

Sign up

6) $19 - 10 = 9$

10) $12 - 10 = 2$

www.mathworksheets4kids.com

8) $13 - 1 = 12$


13) $20 - 14 = 6$

14) $14 - 3 = 11$

15) $18 - 13 = 5$

Name : _____

Score : _____



Subtraction

Horizontal 0-20: T1S3

1) $20 - 13 =$

2) $18 - 0 =$

3) $11 - 10 =$

4) $17 - 3 =$

6) $16 - 8 =$

7) $19 - 7 =$

8) $20 - 3 =$

10) $14 - 12 =$

9) $10 - 5 =$

13) $16 - 10 =$

14) $19 - 4 =$

15) $15 - 2 =$

PREVIEW

Access the largest collection of
worksheets for just **\$19.95** per year!

Members, please
log in to
download this
worksheet.

Log in


Not a member?
Please sign up to
gain complete
access.

Sign up

www.mathworksheets4kids.com

Name : _____

Score : _____



Answer key

Subtraction

Horizontal 0-20: T1S3

1) $20 - 13 = 7$

2) $18 - 0 = 18$

3) $11 - 10 = 1$

4) $17 - 3 = 14$

PREVIEW

5) $16 - 8 = 8$

Access the largest collection of
worksheets for just **\$19.95** per year!

7) $19 - 7 = 12$

Members, please
log in to
download this
worksheet.

Log in

Not a member?
Please sign up to
gain complete
access.

Sign up

6) $20 - 3 = 17$

www.mathworksheets4kids.com

10) $14 - 12 = 2$

9) $10 - 5 = 5$

13) $16 - 10 = 6$

14) $19 - 4 = 15$

15) $15 - 2 = 13$

Subtraction

Horizontal 0-20: T2S1

1) $18 - 2 =$

2) $20 - 0 =$

3) $11 - 1 =$

4) $15 - 14 =$

5) $13 -$

6) $=$

7) $19 -$

1) $=$

9) $7 -$

3) $=$

PREVIEW

Access the largest collection of
worksheets for just **\$19.95** per year!

Members, please
log in to
download this
worksheet.

Log in

Not a member?
Please sign up to
gain complete
access.

Sign up


www.mathworksheets4kids.com

11) Jim prepared
orphanage ne

f them to an
emain?



12) Twenty people took a ride on the Ferris Wheel. If eight of them got off after a spin, how many people were still seated on the Ferris Wheel?



Subtraction

Horizontal 0-20: T2S1

1) $18 - 2 = 16$

2) $20 - 0 = 20$

3) $11 - 1 = 10$

4) $15 - 14 = 1$

5) $13 -$

6) $= 11$

7) $19 -$

1) $= 8$

9) $7 -$

3) $= 13$

PREVIEWAccess the largest collection of worksheets for just **\$19.95** per year!


Members, please log in to download this worksheet.

Log in

Not a member? Please sign up to gain complete access.

Sign upwww.mathworksheets4kids.com**7 jars remain**11) Jim prepared
orphanage nef them to an
emain?

12) Twenty people took a ride on the Ferris Wheel. If eight of them got off after a spin, how many people were still seated on the Ferris Wheel?

**12 people**

Subtraction

Horizontal 0-20: T2S2

1) $13 - 10 =$

2) $15 - 1 =$

3) $18 - 3 =$

4) $20 - 15 =$

5) $14 -$

$2 =$

7) $16 -$

$0 =$

9) $19 -$

$5 =$

PREVIEW

Access the largest collection of
worksheets for just **\$19.95** per year!

Members, please
log in to
download this
worksheet.

Log in

Not a member?
Please sign up to
gain complete
access.

Sign up

www.mathworksheets4kids.com

11) There were 19
to be damaged

acks were found
good condition?



12) An ice-cream vendor had a stock of 16 ice-cream cones to be sold.
If a customer bought 10 of them, how many cones remain?



Subtraction

Horizontal 0-20: T2S2

1) $13 - 10 = 3$

2) $15 - 1 = 14$

3) $18 - 3 = 15$

4) $20 - 15 = 5$

5) $14 -$

$2 = 7$

7) $16 -$

$0 = 17$

9) $19 -$

$5 = 6$

PREVIEW

Access the largest collection of
worksheets for just **\$19.95** per year!

Members, please
log in to
download this
worksheet.

Log in

Not a member?
Please sign up to
gain complete
access.

Sign up

www.mathworksheets4kids.com

11) There were 19
to be damaged

packs were found
in good condition?

13 packs of dog food



12) An ice-cream vendor had a stock of 16 ice-cream cones to be sold.
If a customer bought 10 of them, how many cones remain?

6 cones remain



Subtraction

Horizontal 0-20: T2S3

1) $17 - 15 =$

2) $18 - 8 =$

3) $5 - 5 =$

4) $13 - 6 =$

5) $14 -$

$2 =$

7) $20 -$

$15 =$

9) $15 -$

$0 =$

PREVIEW

Access the largest collection of worksheets for just **\$19.95** per year!

Members, please log in to download this worksheet.

Log in

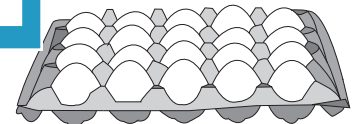
Not a member? Please sign up to gain complete access.

Sign up


www.mathworksheets4kids.com

13) Smith collected 12 eggs to make breakfast for his family. He used 5 eggs in the refrigerator. How many eggs did he have left?

ed 12 of them to eggs in the refrigerator?



14) Elsa had 17 sticks of cotton candy on sale at the fair. If she managed to sell 7 of them, how many remain unsold?



Subtraction

Horizontal 0-20: T2S3

1) $17 - 15 = 2$

2) $18 - 8 = 10$

3) $5 - 5 = 0$

4) $13 - 6 = 7$

5) $14 -$

$2 = 17$

7) $20 -$

$15 = 1$

9) $15 -$

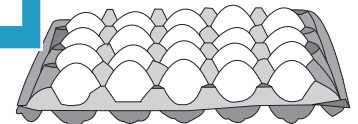
$0 = 12$

PREVIEWAccess the largest collection of worksheets for just **\$19.95** per year!

Members, please log in to download this worksheet.

Log in

Not a member? Please sign up to gain complete access.

Sign upwww.mathworksheets4kids.com**8 eggs**

ed 12 of them to eggs in the refrigerator?

13) Smith collected 12 eggs and made breakfast for his family. He used 4 eggs in the refrigerator. How many eggs did he have left?

14) Elsa had 17 sticks of cotton candy on sale at the fair. If she managed to sell 7 of them, how many remain unsold?

**10 candies remain unsold**