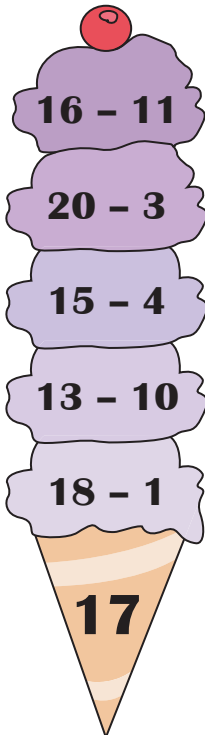


Subtraction Sentence

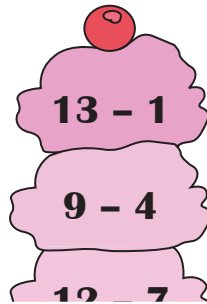
Sheet 1

Identify the correct subtraction sentences that equal the number displayed on each cone.

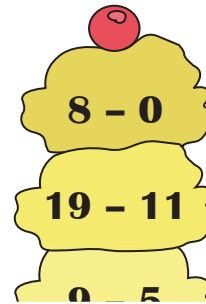
1)



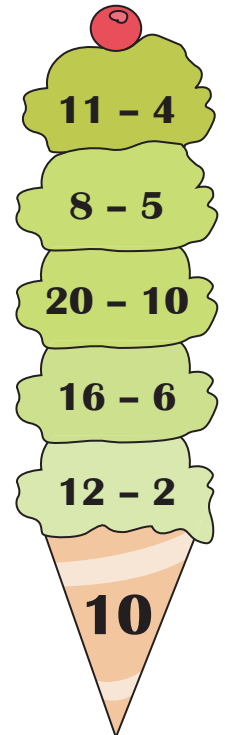
2)



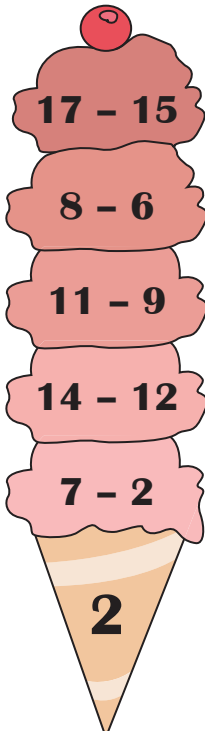
3)




4)



5)



8)



PREVIEW

Gain complete access to the largest collection of worksheets in all subjects!

Members, please log in to download this worksheet.

Not a member? Please sign up to gain complete access.

www.mathworksheets4kids.com

11 - 0

16 - 5

11

15 - 1

12 - 7


14

Subtraction Sentence

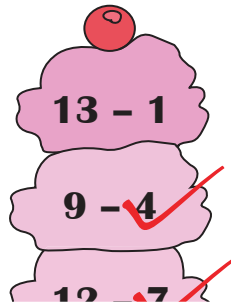
Sheet 1

Identify the correct subtraction sentences that equal the number displayed on each cone.

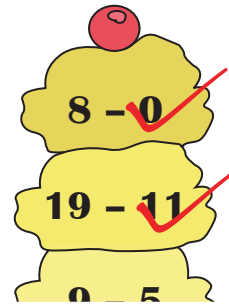
1)



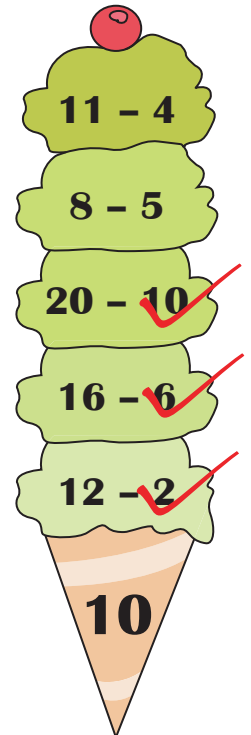
2)



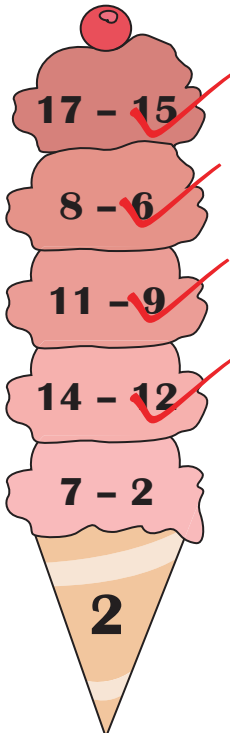
3)



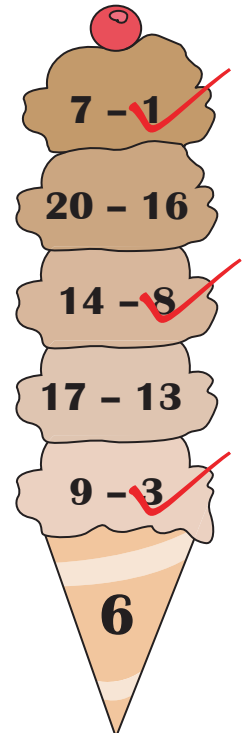
4)



5)



8)



PREVIEW

Gain complete access to the largest collection of worksheets in all subjects!

Members, please log in to download this worksheet.

Not a member? Please sign up to gain complete access.

www.mathworksheets4kids.com

11 - 0 ✓

16 - 5 ✓

11

15 - 1 ✓

12 - 7

14